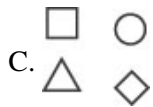
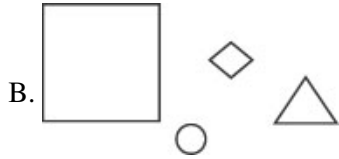
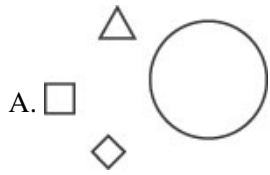


Name: \_\_\_\_\_

Date: \_\_\_\_\_

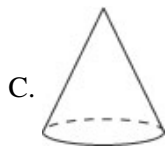
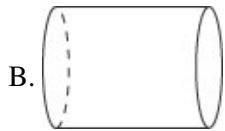
---

1. Which of the following shows the objects sorted by size?

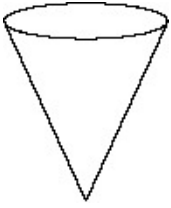


---

2. Which of these shows a cylinder?

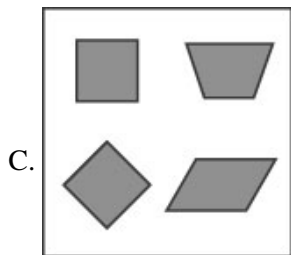
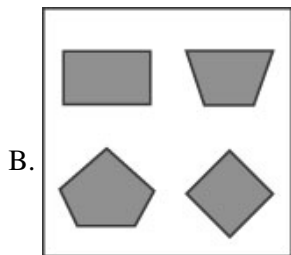
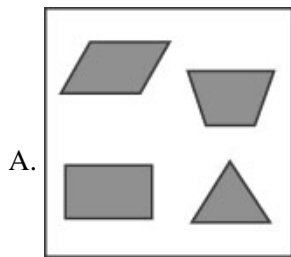


3. What is the name of the shape shown below?

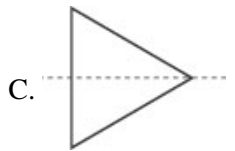
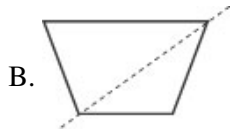


- A. sphere
  - B. cube
  - C. cone
- 

4. Which set has only shapes with 4 sides?

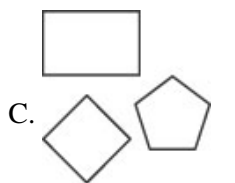
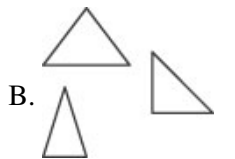
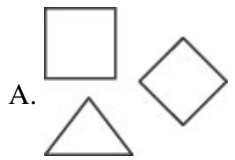


5. If each of these shapes were folded along the dotted line, which shape would have two parts that match?

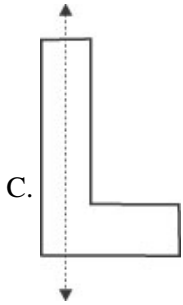
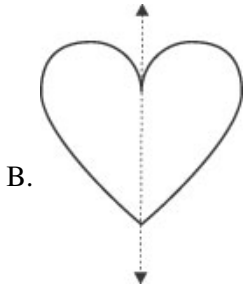
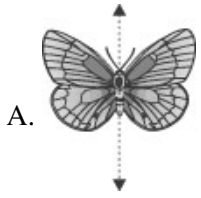


---

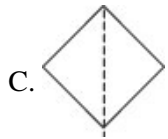
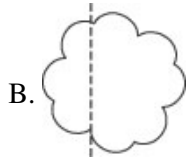

6. Which of the following shows the objects sorted by shape?



7. Which picture is NOT the same on both sides of the line?

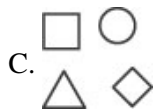
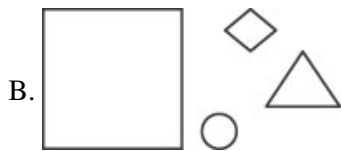
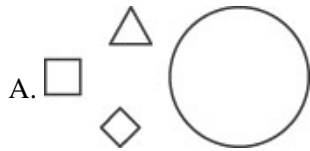


8. Which shape is the same on both sides of the dotted line?



---

9. Which set shows the shapes sorted by size?



**Answer Key**

1. C)

2. B)

3. C) cone

4. C)

5. C)

6. B)

7. C)

8. C)

9. C)