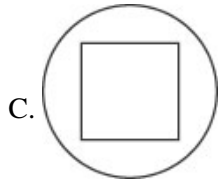
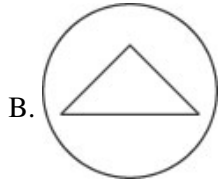
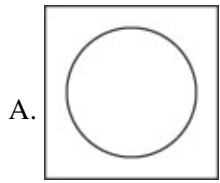


Name: _____

Date: _____

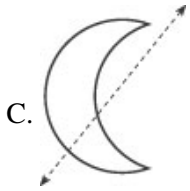
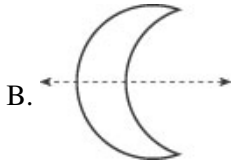
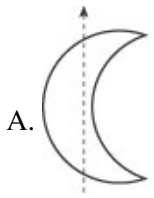
1. Which picture shows a square inside a circle?



2. How many sides does a rectangle have?

- A. 3
 - B. 4
 - C. 5
-

3. Which is the same on both sides of the line?



4. How do you know if something is a triangle?

- A. All of its sides are the same length.
- B. It has 4 sides.
- C. It has 3 corners.

Answer Key

1. C)

2. B) 4

3. B)

4. C) It has 3 corners.