

Name: _____

Date: _____

1. Which could you use in telling someone how tall you are?


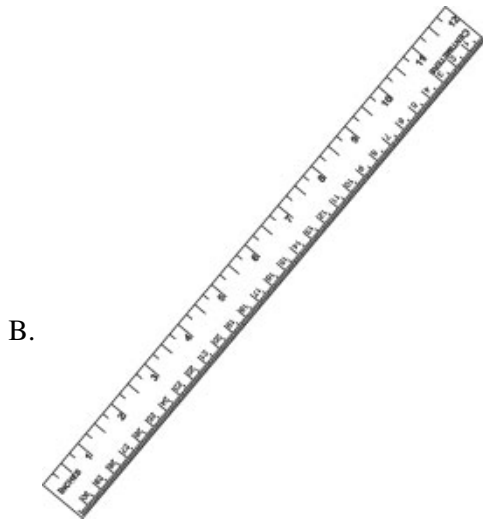
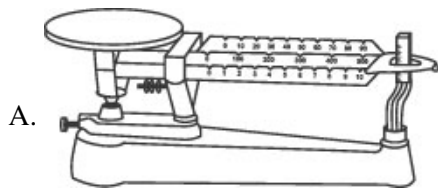
- A. centimeter
 - B. liter
 - C. kilogram
-

2. What time does the clock show?



- A. 1:30
 - B. 2:30
 - C. 6:00
-

3. Which is the best tool to see how tall a door is?



4. How many hours are there in a day?

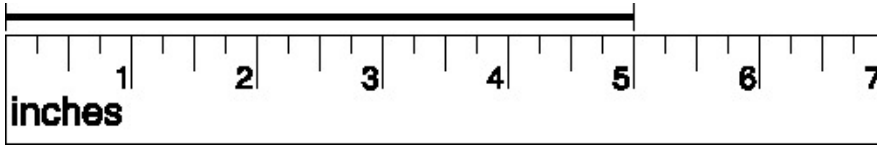
- A. 10
- B. 12
- C. 24

5. Which of these is the same as 1 day?

- A. 4 weeks
 - B. 24 hours
 - C. 60 minutes
-

6.

Use the ruler and line segment below to answer this question.



How long is this line segment?

- A. 6 inches
- B. 5 inches
- C. 4 inches
- D. 3 inches

Answer Key

1. A) centimeter

2. A) 1:30

3. B)

4. C) 24

5. B) 24 hours

6. B) 5 inches