

Name: _____

Date: _____

1. José had 59 baseball cards. His sister lost some of them. José has 37 cards left.

Which number sentence describes what happened?

- A. $59 - c = 37$
 - B. $59 + 37 = c$
 - C. $59 + c = 37$
-

2.

Karen planted 12 sunflower seeds. Bob planted 8 sunflower seeds. How many seeds were planted?
What should you do to answer this question?

- A. add
 - B. subtract
 - C. multiply
-

3. What number comes next in the pattern below?

250, 300, 350, ____

- A. 400
 - B. 450
 - C. 500
-

4. There were 13 apples in a bowl. Casey took 2 of the apples. Which number sentence tells how many apples are in the bowl now?

- A. $13 - 11 = 2$
 - B. $13 - 2 = 11$
 - C. $13 + 2 = 15$
-

5. Which number is the same as

$500 + 20 + 7$?

- A. 527
 - B. 572
 - C. 725
-

6. Add.

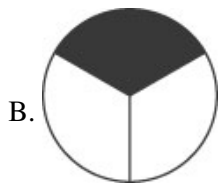
$$\begin{array}{r} 10 \\ 4 \\ + 23 \\ \hline \end{array}$$

- A. 28
- B. 37
- C. 73



7. Nick sold 17 posters. Jay sold 12 posters. How many posters were sold in all?

- A. 19
 - B. 25
 - C. 29
-

8. Which picture shows $\frac{1}{3}$ shaded?



9. Which does the picture show?



- A. $3 + 5$
 - B. $5 + 5$
 - C. 3×5
 - D. 5×5
-

10. Add.

$$13 + 11 =$$

A. 14

B. 24

C. 34

Answer Key

1. A) $59 - c = 37$

2. A) add

3. A) 400

4. B) $13 - 2 = 11$

5. A) 527

6. B) 37

7. C) 29

8. B)

9. C) 3×5

10. B) 24