

Name: \_\_\_\_\_

Date: \_\_\_\_\_

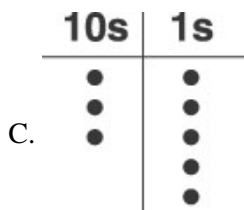
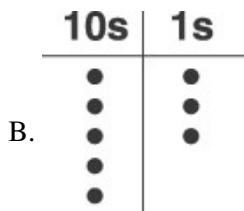
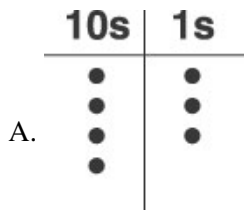
1. So far this year, Carl has read 36 books. Sue has read 28 more books than Carl. How many books has Sue read?

- A. 54
- B. 63
- C. 64

2. Which number is the same as 425?

- A. 4 hundreds, 2 tens, and 5 ones
- B. 2 hundreds, 4 tens, and 5 ones
- C. 4 hundreds, 5 tens, and 2 ones

3. Which of these shows the number 35?



4. Mrs. Smith's class blew up 48 balloons. Mr. Evan's class blew up 36 balloons. How many balloons did the 2 classes blow up in all?

- A. 74
- B. 84
- C. 86

5. Which number should go in the box?

$$19 + \square = 19$$

- A. 0
  - B. 1
  - C. 19
- 

6.

Which symbol belongs in the circle?

$$12 \bigcirc 6 = 6$$

- A. +
  - B.  $\times$
  - C. -
- 

7.

Karen planted 12 sunflower seeds. Bob planted 8 sunflower seeds. How many seeds were planted?

What should you do to answer this question?

- A. add
  - B. subtract
  - C. multiply
- 

8. There were 256 people on a plane. 21 people got off the plane in Atlanta. How many people were left on the plane?

- A. 136
  - B. 235
  - C. 277
- 

9. A class had 20 students; 12 of the students went to art. How many students were left in class?

- A. 8
  - B. 18
  - C. 32
- 

10. Which is the same as  $6 + 8$ ?

- A.  $8 - 6$
- B.  $6 \times 8$
- C.  $8 + 6$

**Answer Key**

1. C) 64

2. A) 4 hundreds, 2 tens, and 5 ones

3. C)

4. B) 84

5. A) 0

6. C) –

7. A) add

8. B) 235

9. A) 8

10. C)  $8 + 6$