

Name: _____

Date: _____


1. Patrick started his homework at the time shown on the clock.



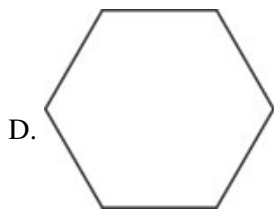
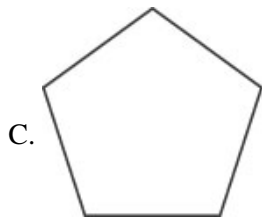
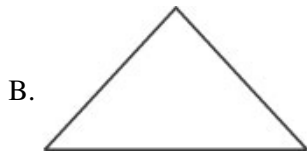
He finished his homework in 45 minutes. What time did he finish?

- A. 4:15
 - B. 4:45
 - C. 5:15
 - D. 5:45
-

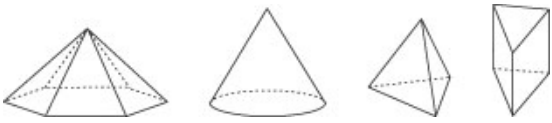
2. Use the picture below to answer this question.



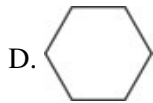
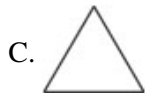
Suppose you were standing above the tea tin looking straight down at it. Which shape would you see?




3. Use the figures below to answer this question.



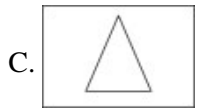
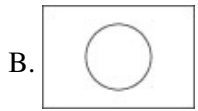
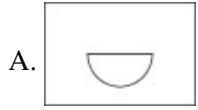
Which could NOT be the base of one of the solid figures above?



4. Julie traced the bottom of the cone.



Which shows how her tracing looked?




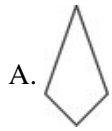
5. Below is a picture of a symmetric design which has been folded on its line of symmetry.



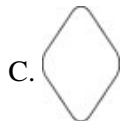
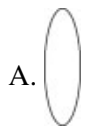
Which is a picture of the design when the paper is unfolded?



6. Which figure has the same shape as ?




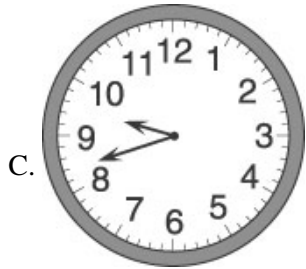
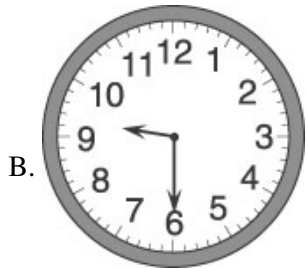

7. Which figure has the same shape as




8. Use the picture of the clock below to answer this question.



Which clock face shows the same time as the clock above?






9. What time is shown on the clock?



- A. 6:00
- B. 12:30
- C. 1:30
- D. 6:05

10. Frank bought a hot dog for 58¢. Which picture shows how much he spent?

- A. 
- B. 
- C. 
- D. 

Answer Key

1. C) 5:15

2. D)

3. B)

4. B)

5. B)

6. B)

7. B)

8. C)

9. C) 1:30

10. C)