

Name: \_\_\_\_\_

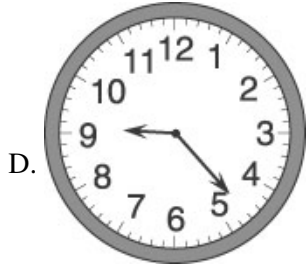
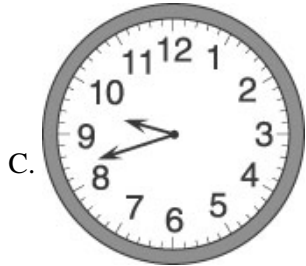
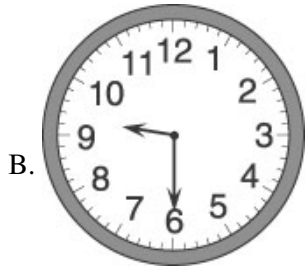

Date: \_\_\_\_\_

---

1. Use the picture of the clock below to answer this question.



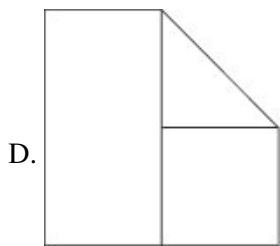
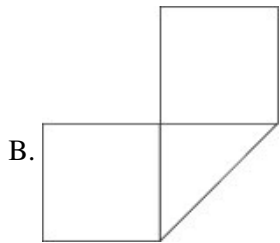
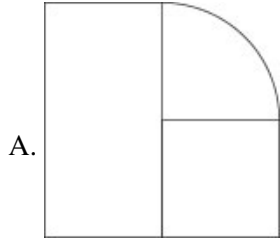
Which clock face shows the same time as the clock above?



2. Tasha has three shapes: a triangle, a rectangle, and a square.

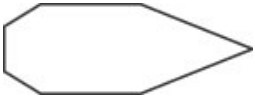


Which figure can she create using each shape only once?



3.

Use the figure below to answer this question.



Jamie drew the figure above. How many line segments are shown in her figure?

- A. 5
  - B. 6
  - C. 7
  - D. 8
- 

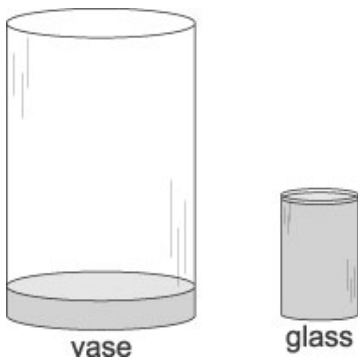
4. Bev buys an apple for 49 cents and a cookie for 16 cents. How much change does she get back from \$1.00?

- A. 35¢
  - B. 45¢
  - C. 55¢
  - D. 65¢
- 

5. Which letter could Mrs. Waters change into a capital L by using a pair of scissors?

- A. C
  - B. K
  - C. T
  - D. Z
- 

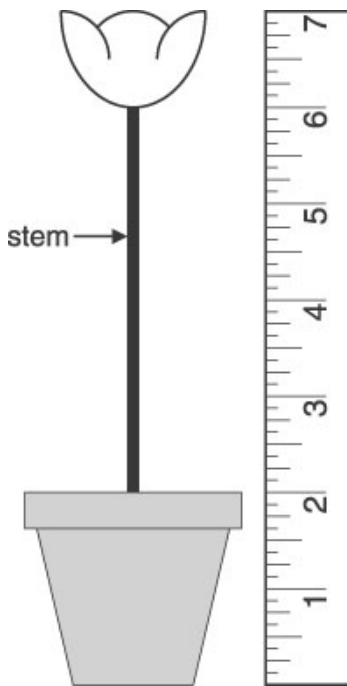
6. John filled the glass shown below with water and poured the water into the vase.



About how many glasses of water would it take to fill the vase?

- A. 5
  - B. 10
  - C. 25
  - D. 30
-

7. Use the picture below to answer this question.



Whitney is measuring the stem of a plant with her ruler. How long is the STEM of the plant?

- A. 4 inches
  - B. 5 inches
  - C. 6 inches
  - D. 7 inches
- 

8. A pencil is about 20 \_\_\_\_\_ long.

- A. millimeters
  - B. centimeters
  - C. kilometers
  - D. meters
- 

9. Which is closest to 200?

- A.  $110 + 20$
  - B.  $110 + 80$
  - C.  $110 + 150$
  - D.  $110 + 200$
-

10.

Which is the BEST estimate for the difference between the two numbers?

$$\begin{array}{r} 487 \\ - 335 \\ \hline \end{array}$$

- A. 800
- B. 500
- C. 300
- D. 200

**Answer Key**

1. C)

2. D)

3. C) 7

4. A) 35

5. C) T

6. B) 10

7. A) 4 inches

8. B) centimeters

9. B)  $110 + 80$

10. D) 200