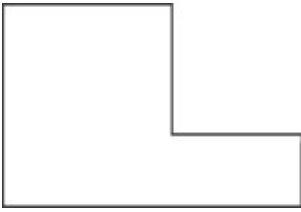


Name: \_\_\_\_\_

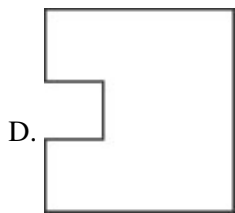
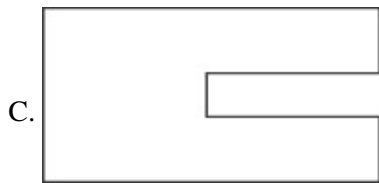
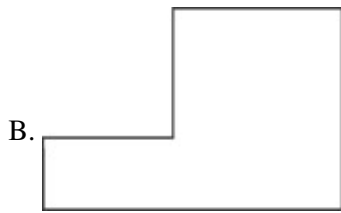
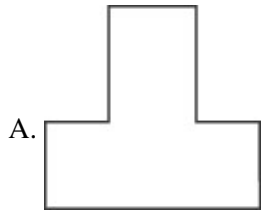
Date: \_\_\_\_\_

---

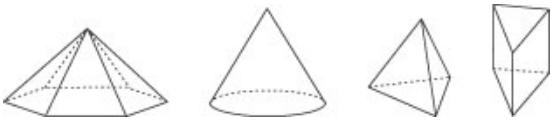
1. Use the shape below to answer this question.



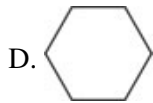
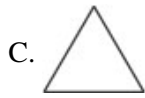
Which has the same shape as the shape above?



2. Use the figures below to answer this question.



Which could NOT be the base of one of the solid figures above?

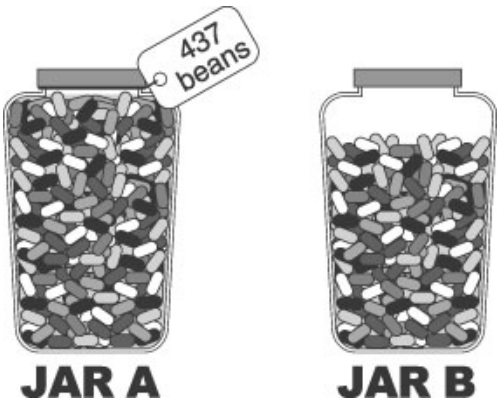


---

3. Which is heaviest?

- A. a pencil
  - B. a dollar bill
  - C. a banana
  - D. six paper clips
-

4. Use the pictures below to answer this question.



**JAR A**

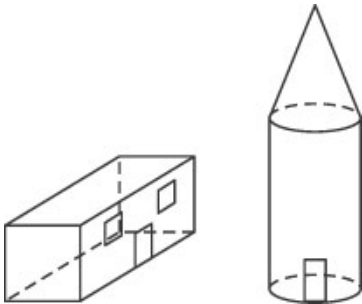
**JAR B**

Which is the BEST estimate for the number of beans in Jar B?

- A. 100
- B. 150
- C. 340
- D. 430

---

5. Joanne built models of a house and a silo with her blocks.




Which shapes did she use?

- A. rectangular prism, cylinder, and cone
- B. cube, pyramid, and cone
- C. rectangular prism, pyramid, and sphere
- D. cube, cylinder, and sphere

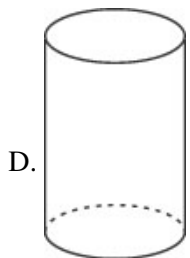
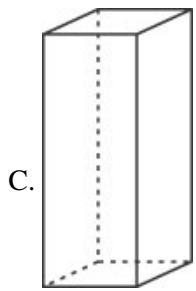
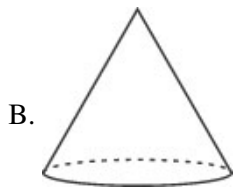

6. Frank bought a hot dog for 58¢. Which picture shows how much he spent?



7. I am a solid shape. When you look at me a certain direction, this is what you see.



Which shape could I NOT be?



8. Patrick started his homework at the time shown on the clock.




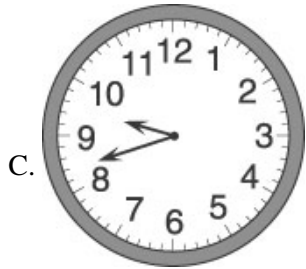
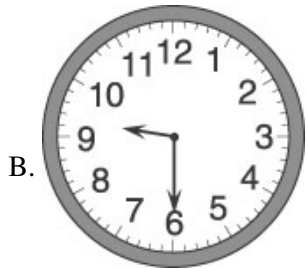

He finished his homework in 45 minutes. What time did he finish?

- A. 4:15
  - B. 4:45
  - C. 5:15
  - D. 5:45
-


9. Use the picture of the clock below to answer this question.



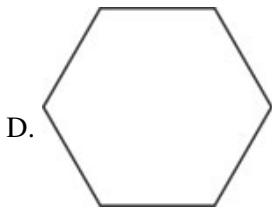
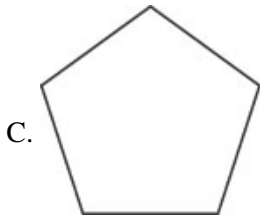
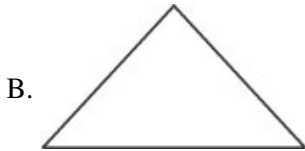
Which clock face shows the same time as the clock above?



10. Use the picture below to answer this question.



Suppose you were standing above the tea tin looking straight down at it. Which shape would you see?



**Answer Key**

1. B)

2. B)

3. C) a banana

4. C) 340

5. A) rectangular prism, cylinder, and cone

6. C)

7. C)

8. C) 5:15

9. C)

10. D)