
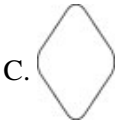
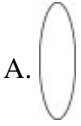


Name: _____

Date: _____

1. Which figure has the same shape as



2.

Use the calendar below to answer this question.

December							
S	M	T	W	T	F	S	
	1	2	3	4	5	6	
7	8	9	10	11	12	13	
14	15	16	17	18	19	20	
21	22	23	24	25	26	27	
28	29	30	31				

Which is the date of the fourth Monday of the month?

- A. December 8
 - B. December 15
 - C. December 22
 - D. December 29
-

3. Which letter can be folded in half so the sides match?

- A. W
 - B. N
 - C. L
 - D. S
-

4. Use the menu below to answer this question.

Snack Shop	
Pizza Slice	\$1.89
Cheeseburger.....	\$2.25
Salad Bar	\$2.50
Milk Shake.....	\$1.19
Fruit Juice.....	\$0.95

Jenna has \$3.00 to spend for lunch. Which 2 items listed below can she buy?

- A. pizza slice, fruit juice
 - B. cheeseburger, fruit juice
 - C. salad bar, fruit juice
 - D. pizza slice, milk shake
-

5. A pencil is about 20 _____ long.

- A. millimeters
 - B. centimeters
 - C. kilometers
 - D. meters
-

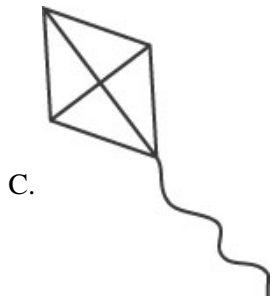
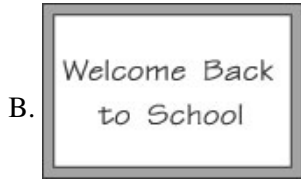
6. Patrick started his homework at the time shown on the clock.



He finished his homework in 45 minutes. What time did he finish?

- A. 4:15
- B. 4:45
- C. 5:15
- D. 5:45

7. Which is a rectangle?



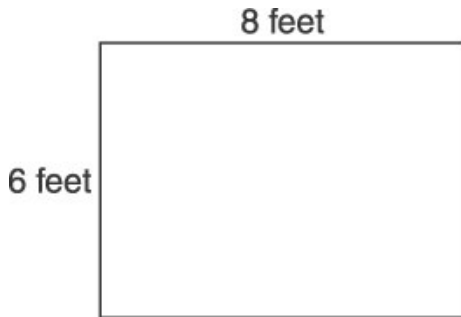
8. Use the figure below to answer this question.



If you drew one diagonal in the figure above, what two figures would be made?

- A. rectangles
 - B. squares
 - C. triangles
 - D. parallelograms
-

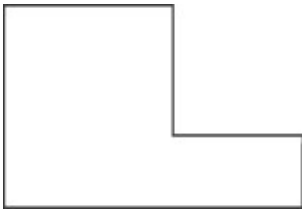
9. The picture below shows the size of a rectangular flower garden.



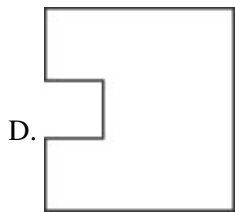
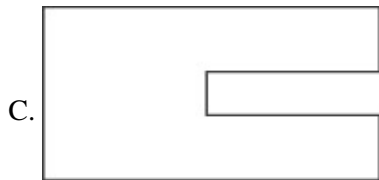
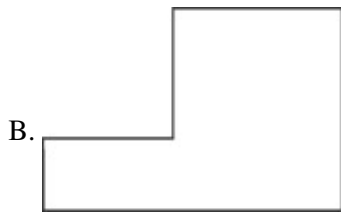
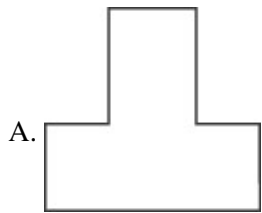
How much fencing would be needed to go around the whole garden?

- A. 14 feet
 - B. 24 feet
 - C. 28 feet
 - D. 48 feet
-

10. Use the shape below to answer this question.



Which has the same shape as the shape above?



Answer Key

1. B)

2. C) December 22

3. A) W

4. A) pizza slice, fruit juice

5. B) centimeters

6. C) 5:15

7. B)

8. C) triangles

9. C) 28 feet

10. B)