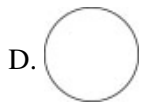
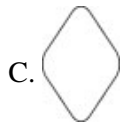


Name: _____

Date: _____

1. Which figure has the same shape as



2.

Use the calendar below to answer this question.

December							
S	M	T	W	T	F	S	
	1	2	3	4	5	6	
7	8	9	10	11	12	13	
14	15	16	17	18	19	20	
21	22	23	24	25	26	27	
28	29	30	31				

Which is the date of the fourth Monday of the month?

- A. December 8
 - B. December 15
 - C. December 22
 - D. December 29
-

3. Which is heaviest?


- A. a pencil
 - B. a dollar bill
 - C. a banana
 - D. six paper clips
-

4. Which letter can be folded in half so the sides match?

- A. W
 - B. N
 - C. L
 - D. S
-

5.

Use the figure below to answer this question.



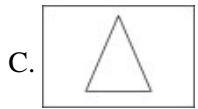
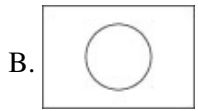
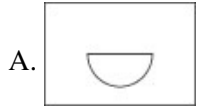
Jamie drew the figure above. How many line segments are shown in her figure?

- A. 5
 - B. 6
 - C. 7
 - D. 8
-

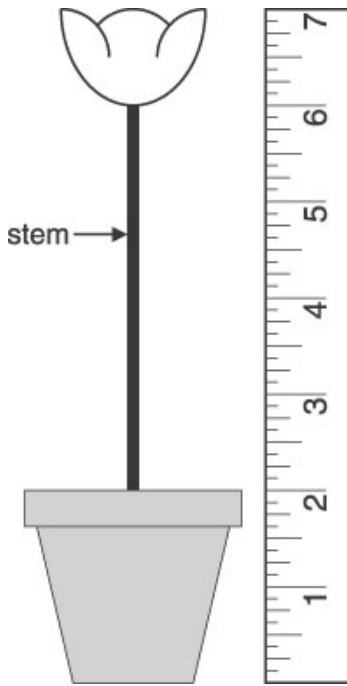
6. Julie traced the bottom of the cone.



Which shows how her tracing looked?



7. Use the picture below to answer this question.



Whitney is measuring the stem of a plant with her ruler. How long is the STEM of the plant?

- A. 4 inches
 - B. 5 inches
 - C. 6 inches
 - D. 7 inches
-

8. Use the figure below to answer this question.





If you drew one diagonal in the figure above, what two figures would be made?

- A. rectangles
 - B. squares
 - C. triangles
 - D. parallelograms
-

9. Which can be used to find out how much Juan weighs?

- A. a clock
 - B. a scale
 - C. a ruler
 - D. a thermometer
-

10. Which flag has a line of symmetry?



Answer Key

1. B)

2. C) December 22

3. C) a banana

4. A) W

5. C) 7

6. B)

7. A) 4 inches

8. C) triangles

9. B) a scale

10. B)