


Name: _____

Date: _____

1. I am an even number. I am greater than 356 and less than 410. Which number could I be?

- A. 393
- B. 348
- C. 422
- D. 402

2. Use the picture below to answer this question.



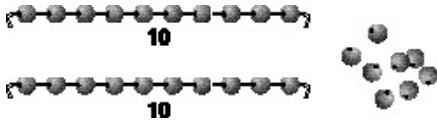
What part of the group of animals is dogs?

- A. $\frac{3}{1}$
- B. $\frac{3}{3}$
- C. $\frac{3}{4}$
- D. $\frac{3}{7}$

3. Which number is the same as eighty-eight?

- A. 808
- B. 88
- C. 80
- D. 880

4. Use the beads below to answer this question.



How many beads are shown in the picture?

- A. 28
 - B. 82
 - C. 208
 - D. 280
-

5. The population of the town where Rashad lives is thirty-two thousand four hundred five. Which of the following names this number?

- A. 324,005
 - B. 32,450
 - C. 32,405
 - D. 3,245
-

6. Which set has all odd numbers?

- A. 3, 8, 11, 13
 - B. 3, 7, 9, 11
 - C. 5, 9, 11, 12
 - D. 5, 9, 10, 11
-

7. Which is 323 rounded to the nearest ten?

- A. 300
 - B. 320
 - C. 325
 - D. 330
-

8. What does the 6 in 4,362 stand for?

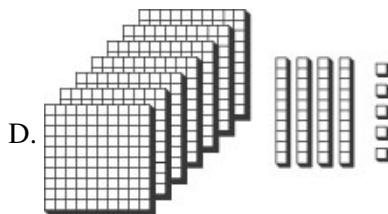
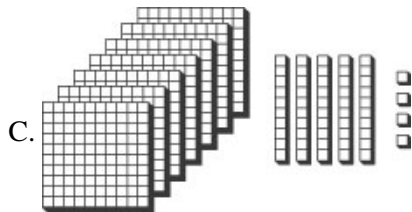
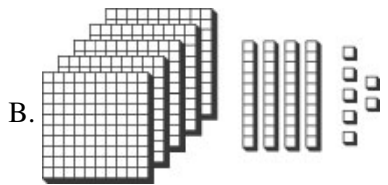
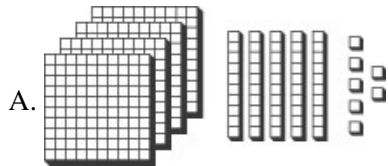
- A. 6
 - B. 60
 - C. 600
 - D. 6,000
-

9. Base 10 blocks represent numbers.



□ = one

Which shows the number 745?



10. The pattern for counting by fives looks like this:

5, 10, 15, 20, 25, 30, 35, 40 . . .

Which of the following statements is true about this pattern?

- A. The number in the ones place will always be 5 or 0.
- B. The numbers are also counting by twos.
- C. They are all even numbers.
- D. They are all odd numbers.

Answer Key

1. D) 402

2. D)

3. B) 88

4. A) 28

5. C) 32,405

6. B) 3, 7, 9, 11

7. B) 320

8. B) 60

9. D)

10. A) The number in the ones place will always be 5 or 0.