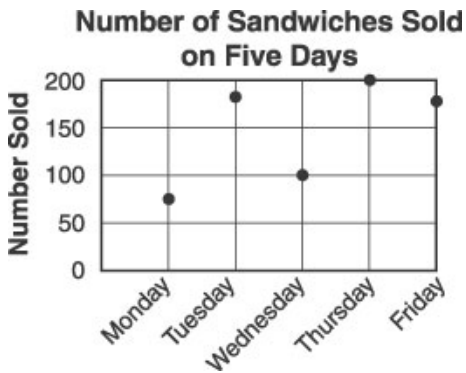


Name: _____

Date: _____

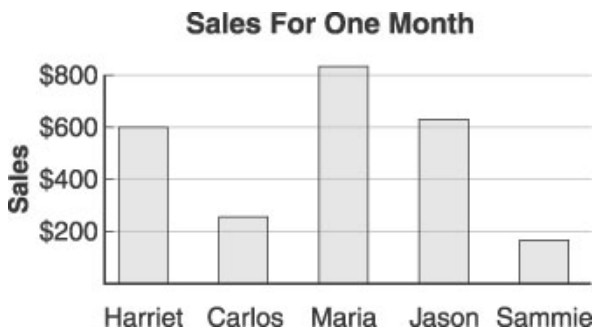
1. Use the graph below to answer this question.



According to the graph, about how many sandwiches were sold on Tuesday?

- A. 100
 - B. 150
 - C. 180
 - D. 200
-

2. Use the graph below to answer this question.







According to the graph, which person's sales were closest to \$400 for the month?

- A. Harriet
 - B. Carlos
 - C. Jason
 - D. Sammie
-

3. Jim is finishing this graph for his class. How should he show that 8 students ride in cars?

How Students Get to School

Ways to Travel	Number of Students
Walk	
Ride in Bus	
Ride Bikes	
Ride in Cars	

 = 2 students



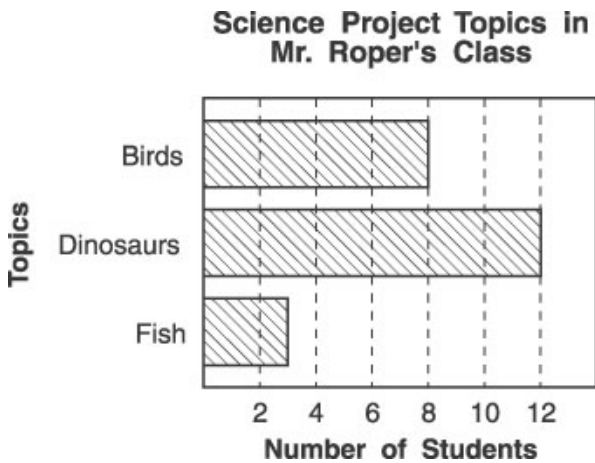
4. You are in an apple bobbing contest. There are only 16 apples left in the tub: 9 are red, 5 are green, and 2 are yellow.



If you close your eyes and bob for an apple, what color apple are you LEAST likely to get?

- A. yellow
 - B. green
 - C. red
 - D. The chances are all the same.
-

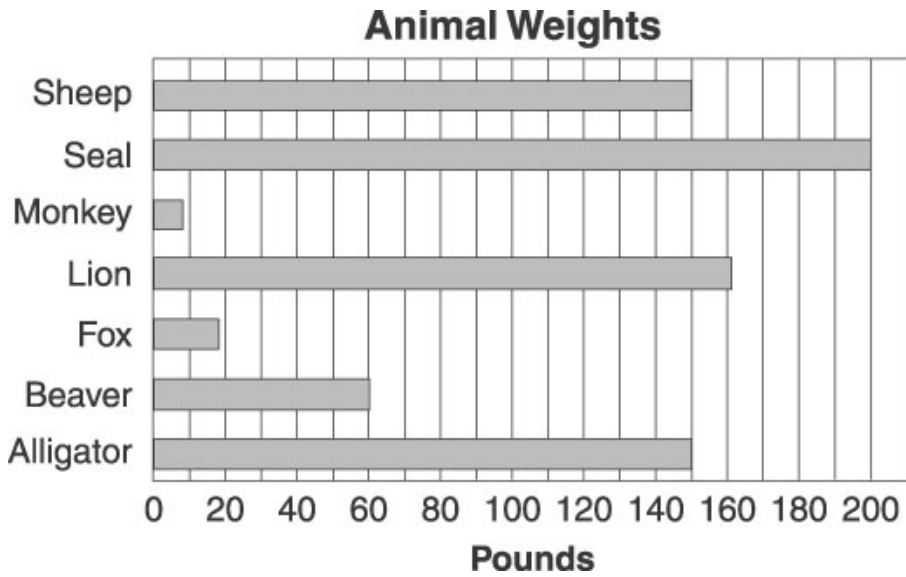
5. Use the graph below to answer this question.



Which problem could you solve from the data shown in the graph above?

- A. How many more girls did projects on dinosaurs than boys?
 - B. How many students started the projects but never finished them?
 - C. How many more dinosaur projects were there than fish projects?
 - D. How many fish projects described more than 3 fish?
-


6. Look at the chart below. Then answer this question.



Which animal is heavier than a lion?

- A. alligator
 - B. fox
 - C. seal
 - D. sheep
-

7. Use the pictograph below to answer this question.

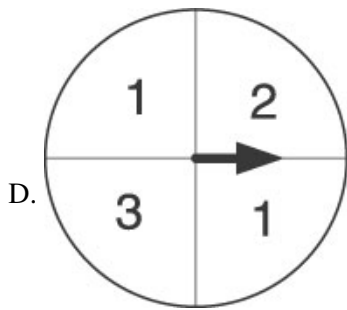
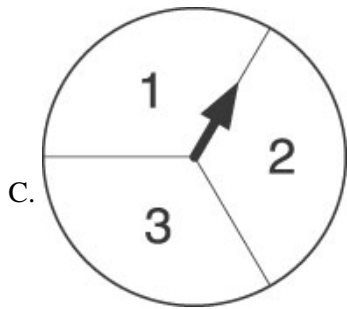
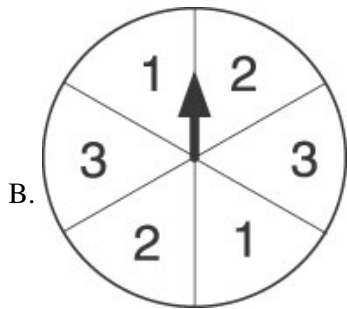
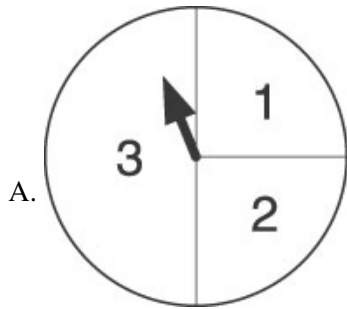


Key: = 1 box with 10 books

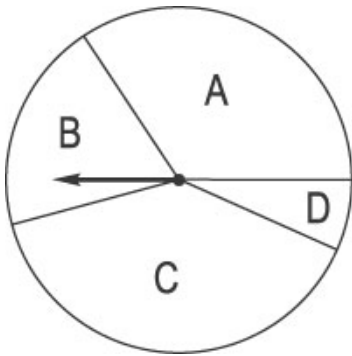
Which two teachers have a total of 80 books?

- A. Mrs. Jones and Mr. Smith
 - B. Mrs. Jones and Mrs. Plum
 - C. Mr. Smith and Miss Collins
 - D. Mr. Smith and Mrs. Plum
-

8. Ted is making a game with spinners. The winner will be the person who spins a 1 the most in 20 turns. Which spinner is MOST LIKELY to land on 1?



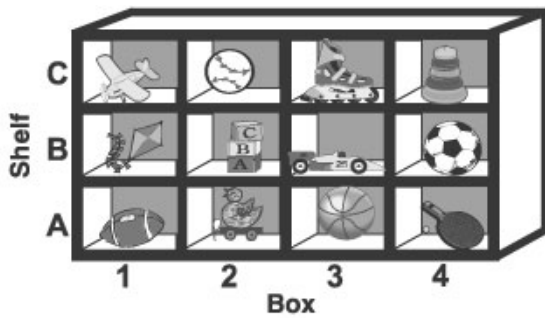
9. Use the spinner below to answer this question.







If you spin the spinner 100 times, which section will the needle probably land on most often?

- A. section A
- B. section B
- C. section C
- D. section D

10. Which toy is in box 1 on shelf B?



- A. 
- B. 
- C. 
- D. 

Answer Key

1. C) 180

2. B) Carlos

3. B)

4. A) yellow

5. C) How many more dinosaur projects were there than fish projects?

6. C) seal

7. D) Mr. Smith and Mrs. Plum

8. D)

9. C) section C

10. D)