

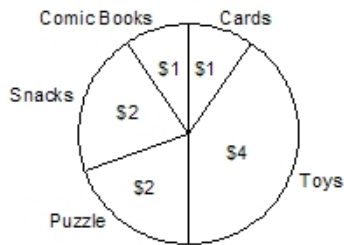
Name: _____

Date: _____

1. What method do you use to find the mean for the scores 80, 84, and 90?

- A. add all the numbers and divide by three
 - B. add the first two numbers, divide by two, then add the third
 - C. add the lowest grade and highest grade, and divide by two
 - D. subtract the lowest from the highest
-

2. Nam has \$10.00 to spend. The graph shows how he spent his money.







How much did Nam spend on toys and snacks?

- A. \$6.00
 - B. \$5.00
 - C. \$4.00
 - D. \$2.00
-

3.

Which shows that 12 students had perfect attendance in May?

Perfect Attendance	
Month	Number of Students
February	
March	
April	
May	

 = 3 Students

- A. 
- B. 
- C. 
- D. 

Answer Key

1. A) add all the numbers and divide by three

2. A) \$6.00

3. B)