

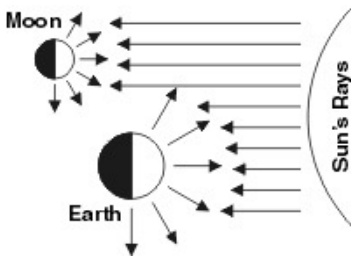
Name: \_\_\_\_\_

Date: \_\_\_\_\_

1. Which planet is closest to Earth?

- A. Neptune
- B. Saturn
- C. Uranus
- D. Venus

2. Use the diagram below to answer this question.



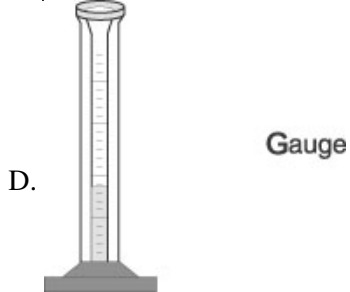
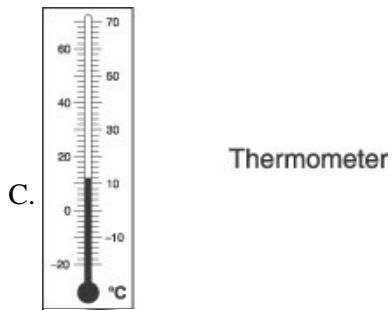
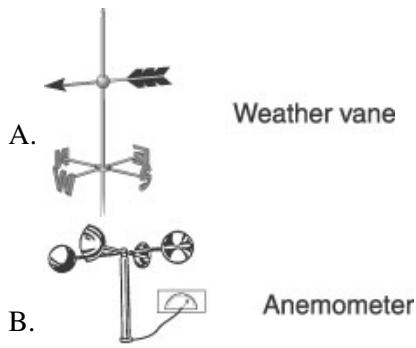
Which conclusion is supported by the diagram?

- A. The Moon does not produce its own light.
- B. The Sun produces all of the energy in the solar system.
- C. The Moon and the Sun are always lined up the same way.
- D. Sunlight would not be possible without moonlight.

3. All of the planets in our solar system travel around

- A. the Sun.
- B. the Moon.
- C. Earth.
- D. the galaxy.

4. Which tool would you use to measure the amount of rain that falls in an area?



5. Ms. Rely's class is doing an experiment outside with ice cubes and colored paper. The ice cube will melt fastest on

- A. red paper.
  - B. green paper.
  - C. white paper.
  - D. black paper.
- 

6. Which tool tells the way the wind is blowing?

- A. barometer
  - B. rain gauge
  - C. thermometer
  - D. weather vane
-

7. When it is noon in Augusta, Georgia it is midnight on the opposite side of Earth. Why doesn't the Sun shine on both sides of Earth at the same time?

- A. The Sun is too small to light everything at once.
  - B. The Moon blocks some sunlight from hitting Earth.
  - C. One half of Earth is always in shadow.
  - D. The Sun is too far away.
- 

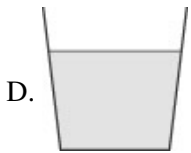
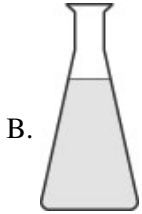
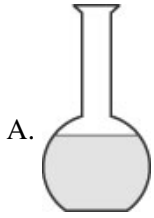
8. How do dewdrops form on a leaf?

- A. They are formed from melted frost.
  - B. They are formed from water vapor in the air.
  - C. They fall as melted snow and are caught on the leaf.
  - D. They fall like a light rain and are caught on the leaf.
- 

9. Which instrument is used to measure temperature?

- A. thermometer
  - B. barometer
  - C. anemometer
  - D. hygrometer
-

10. A liter of water is poured into each of the containers shown below and they are left uncovered in a warm room. After a day, which container will have the LEAST amount of water left in it?



**Answer Key**

1. D) Venus
2. A) The Moon does not produce its own light.
3. A) the Sun.
4. D)
5. D) black paper.
6. D) weather vane
7. C) One half of Earth is always in shadow.
8. B) They are formed from water vapor in the air.
9. A) thermometer
10. C)