

Name: \_\_\_\_\_

Date: \_\_\_\_\_

1. The equator is an imaginary line

- A. that extends from pole to pole.
- B. that connects North America and South America.
- C. that is parallel to the prime meridian.
- D. that divides the world into hemispheres.

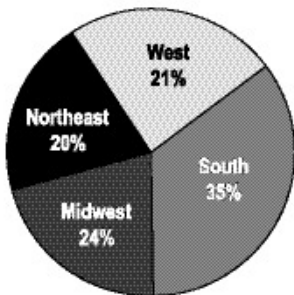
2. By the early 1800s, the Native Americans of Georgia had lost most of their land to white settlers. When the settlers wanted the remaining land, they took the matter to the federal government. What was the federal government's solution to this problem?

- A. The Native Americans had land that had been taken from them returned.
- B. The Native Americans were forced to move to land in the West.
- C. The Native Americans lost one-half of their land in Georgia.
- D. The Native Americans were allowed to keep their land in Georgia.

3.

*Use the circle graph below to answer this question.*

**Percentage of U.S. Population  
by Region - 1990**



Based on the information in the graph, which statement is correct?


- A. There are more people in the Northeast and the West than in the Midwest and the South.
- B. There are more people in the South and the Midwest than in the Northeast and the West.
- C. There are more people in the West and the Midwest than in the South and the Northeast.
- D. There are more people in the Midwest and the Northeast than in the West and the South.

4. Your teacher gave your class an assignment where each student had to talk about a famous person in the history of Georgia. Your teacher wants students to help in the grading. Which of the following would be the BEST way to make sure the students were fair in grading?

- A. Students would grade the work but not include their names as the graders.
  - B. Students would grade only their friends' work.
  - C. Students would grade the work and compare their results with the teacher's grade.
  - D. Students would grade only their own work.
- 

5.

Use the graph below to answer this question.

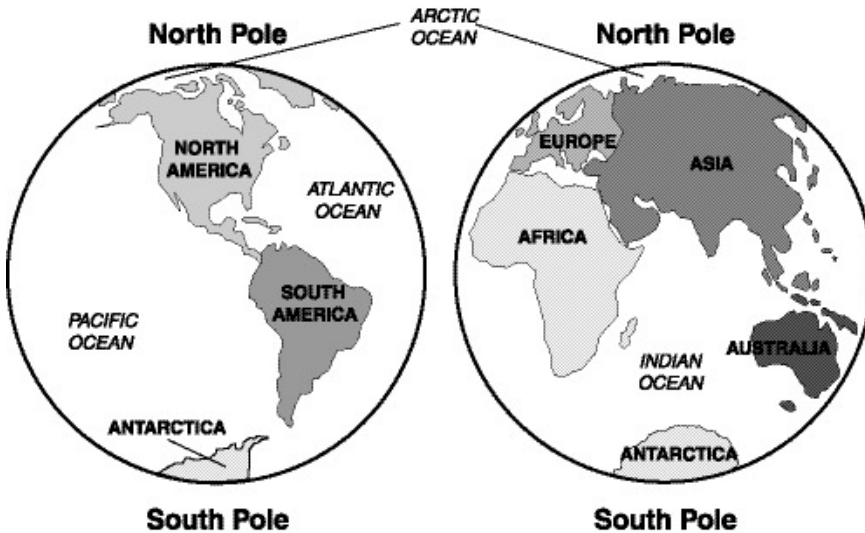


Based on the information on the graph, which statement is correct?

- A. The amounts of money spent on the police and schools are almost the same.
  - B. The amounts of money spent on schools and streets are almost the same.
  - C. The amounts of money spent on streets and the playground are almost the same.
  - D. The amounts of money spent on the playground and schools are almost the same.
-

6.

Use the maps below to answer this question.



Based on the information provided on the maps, which statement is correct?

- A. The continents of Europe and Asia are connected to each other.
- B. The prime meridian runs through North and South America.
- C. The Indian Ocean borders North and South America.
- D. The equator runs through Africa and North America.

---

7. By the early 1800s, the Native Americans of Georgia had lost most of their land to white settlers. When the settlers wanted the remaining land, they took the matter to the national government. What was the national government's solution to this problem?

- A. The Native Americans had land that had been taken from them returned.
- B. The Native Americans were forced to move to land in the West.
- C. The Native Americans lost one-half of their land in Georgia.
- D. The Native Americans were allowed to keep their land in Georgia.

---

8. Look at the following information about Georgian products and resources:

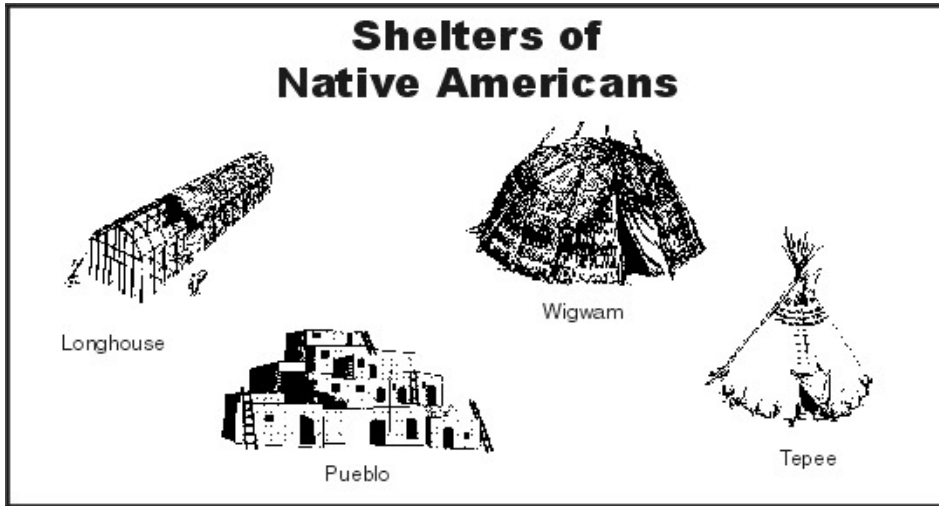
- ☞ Cotton is grown in all regions of Georgia.
- ☞ Most of the peanuts are grown in the southwestern part of Georgia.
- ☞ Cattle, hogs, and chickens are raised in all regions of Georgia.
- ☞ Most of the kaolin is mined in southern Georgia.

Based on the information provided, which of the following is true?

- A. Kaolin and pecans are only found in northern Georgia.
- B. Cotton and peanuts are only found in northeastern Georgia.
- C. Kaolin and cotton are found in southern Georgia.
- D. Chickens and wheat are found in southeastern Georgia.

9.

Use the pictures below to answer this question.



According to the pictures, which of the following is a correct statement?

- A. All of these Native American shelters were made from animal hides.
- B. The longhouse and the wigwam were built in areas with little rain.
- C. All of these Native American shelters were made from natural materials.
- D. The teepee and the pueblo were easy to take down and move.

---

10. Which of the following would be the BEST place to find information on the life of George Washington?

- A. atlas
- B. almanac
- C. newspaper
- D. encyclopedia

**Answer Key**

1. D) that divides the world into hemispheres.
2. B) The Native Americans were forced to move to land in the West.
3. B) There are more people in the South and the Midwest than in the Northeast and the West.
4. C) Students would grade the work and compare their results with the teacher's grade.
5. C) The amounts of money spent on streets and the playground are almost the same.
6. A) The continents of Europe and Asia are connected to each other.
7. B) The Native Americans were forced to move to land in the West.
8. C) Kaolin and cotton are found in southern Georgia.
9. C) All of these Native American shelters were made from natural materials.
10. D) encyclopedia