

Name: _____

Date: _____

1. There are often a number of ways to solve a problem. For example, Europeans settling in the "New World" met Native Americans. Both the Europeans and the Native Americans had different ways of living. Which of the following would have been the FAIREST way for these two groups to live in the same region?

- A. The Europeans should live the way the Native Americans do.
- B. Both the Native Americans and the Europeans should leave North and South America.
- C. The Native Americans should live the way the Europeans do.
- D. Both the Native Americans and the Europeans should have areas where each can live.

2. A student is doing a report on national parks in the United States and has found the information listed below.

- ☞ There are national parks east of the Mississippi River.
- ☞ There are national parks west of the Mississippi River.
- ☞ There are more national parks in states west of the Mississippi River.

Which book would be the BEST source to get information about the statements listed?


- A. *The State Park System in Georgia*
- B. *Hiking Trails of National Parks*
- C. *National Parks in the United States*
- D. *The Great Smoky Mountains National Park*

3. A student is doing a report on the Atlanta Braves baseball team. The student believes that even though the team has been winning, the number of people going to the games is going down. Which of the following would be the BEST to use to show that attendance was going down?

- A. The Atlanta Braves Yearbook 2000
 - B. Major League Baseball Records 1900-1920
 - C. The Atlanta Braves Souvenir Book 2001
 - D. Major League Baseball Attendance Figures 1990-1999
-

4.

Use the graph below to answer this question.



Based on the information on the graph, which statement is correct?

- A. The amounts of money spent on the police and schools are almost the same.
 - B. The amounts of money spent on schools and streets are almost the same.
 - C. The amounts of money spent on streets and the playground are almost the same.
 - D. The amounts of money spent on the playground and schools are almost the same.
-

5. Your teacher gave your class an assignment where each student had to talk about a famous person in the history of Georgia. Your teacher wants students to help in the grading. Which of the following would be the BEST way to make sure the students were fair in grading?

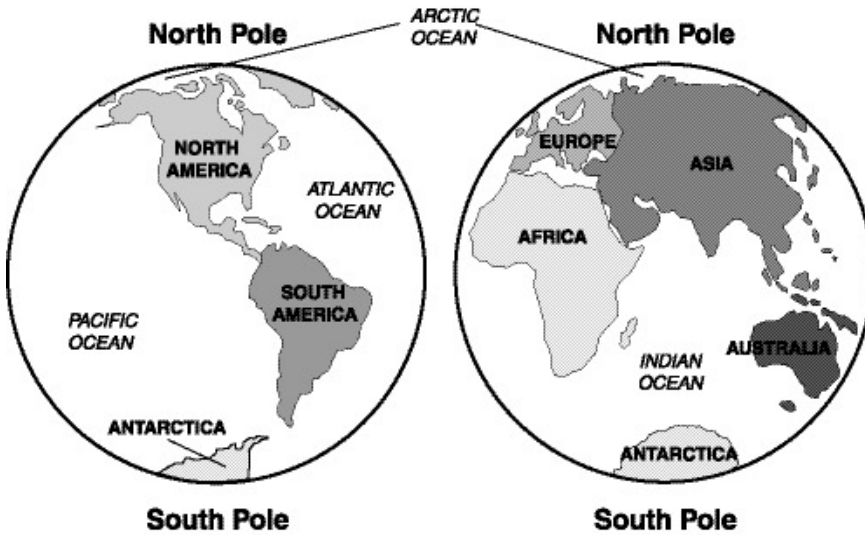
- A. Students would grade the work but not include their names as the graders.
 - B. Students would grade only their friends' work.
 - C. Students would grade the work and compare their results with the teacher's grade.
 - D. Students would grade only their own work.
-

6. Which of the following would be the BEST place to find information on the life of George Washington?

- A. atlas
 - B. almanac
 - C. newspaper
 - D. encyclopedia
-

7.

Use the maps below to answer this question.



Based on the information provided on the maps, which statement is correct?

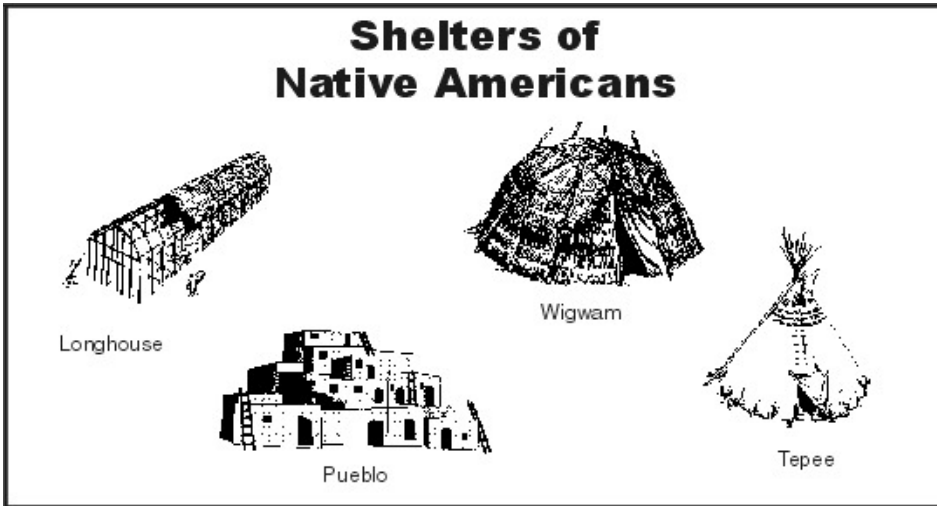
- A. The continents of Europe and Asia are connected to each other.
- B. The prime meridian runs through North and South America.
- C. The Indian Ocean borders North and South America.
- D. The equator runs through Africa and North America.

8. After the Revolutionary War, many Americans wanted to settle in the lands west of the Appalachian Mountains. The mountains were difficult to cross. According to history, what was the solution to help settlers move into Kentucky and other places in the area?

- A. Ships were used to take people to New Orleans and to Kentucky.
 - B. Trains were built to take people to Canada and to Kentucky.
 - C. Trails were built to go through the Appalachian Mountains into Kentucky.
 - D. Canals were built to go around the Appalachian Mountains into Kentucky.
-

9.

Use the pictures below to answer this question.



According to the pictures, which of the following is a correct statement?

- A. All of these Native American shelters were made from animal hides.
- B. The longhouse and the wigwam were built in areas with little rain.
- C. All of these Native American shelters were made from natural materials.
- D. The teepee and the pueblo were easy to take down and move.

10. Robert needs to know what the word *colony* means. Which part of his textbook is BEST to use to find its meaning?

- A. atlas
- B. index
- C. glossary
- D. table of contents

Answer Key

1. D) Both the Native Americans and the Europeans should have areas where each can live.
2. C) *National Parks in the United States*
3. D) Major League Baseball Attendance Figures 1990-1999
4. C) The amounts of money spent on streets and the playground are almost the same.
5. C) Students would grade the work and compare their results with the teacher's grade.
6. D) encyclopedia
7. A) The continents of Europe and Asia are connected to each other.
8. C) Trails were built to go through the Appalachian Mountains into Kentucky.
9. C) All of these Native American shelters were made from natural materials.
10. C) glossary