


Name: _____

Date: _____

1.

Use the graph below to answer this question.

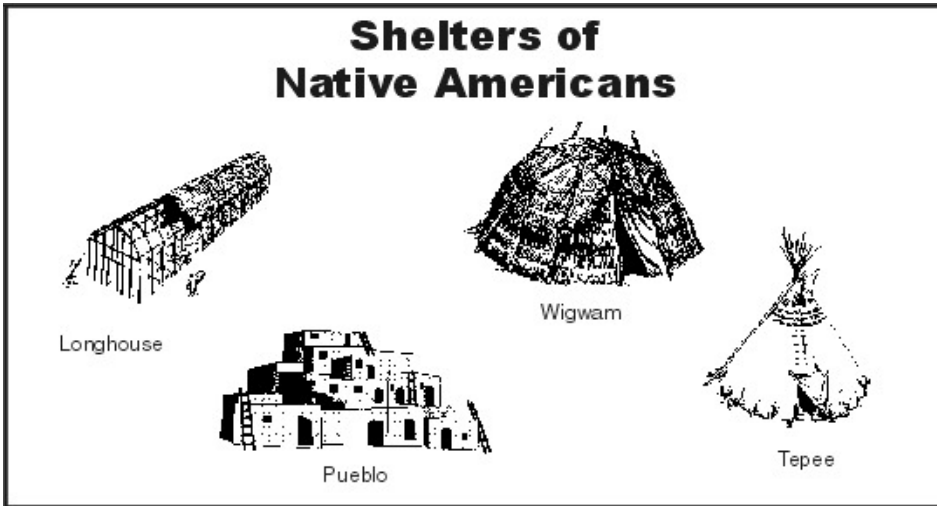


Based on the information on the graph, which statement is correct?

- A. The amounts of money spent on the police and schools are almost the same.
 - B. The amounts of money spent on schools and streets are almost the same.
 - C. The amounts of money spent on streets and the playground are almost the same.
 - D. The amounts of money spent on the playground and schools are almost the same.
-

2.

Use the pictures below to answer this question.

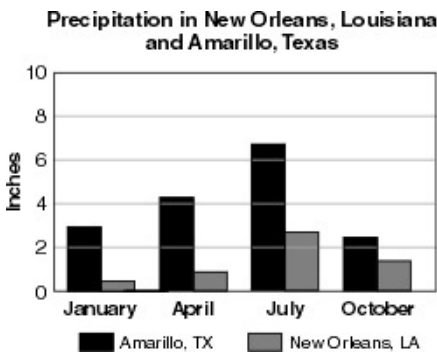


According to the pictures, which of the following is a correct statement?

- A. All of these Native American shelters were made from animal hides.
- B. The longhouse and the wigwam were built in areas with little rain.
- C. All of these Native American shelters were made from natural materials.
- D. The teepee and the pueblo were easy to take down and move.

3.

Use the graph below to answer this question.



Based on the information in the graph, which of the following is a correct statement?

- A. There is more rain in New Orleans in July than in Amarillo in April.
- B. New Orleans has more rain in April than in July.
- C. There is more rain in Amarillo in January than in New Orleans in October.
- D. Amarillo has more rain in January than in April.

4. A student is doing a report on the Atlanta Braves baseball team. The student believes that even though the team has been winning, the number of people going to the games is going down. Which of the following would be the BEST to use to show that attendance was going down?

- A. The Atlanta Braves Yearbook 2000
 - B. Major League Baseball Records 1900-1920
 - C. The Atlanta Braves Souvenir Book 2001
 - D. Major League Baseball Attendance Figures 1990-1999
-

5. By the early 1800s, the Native Americans of Georgia had lost most of their land to white settlers. When the settlers wanted the remaining land, they took the matter to the federal government. What was the federal government's solution to this problem?

- A. The Native Americans had land that had been taken from them returned.
 - B. The Native Americans were forced to move to land in the West.
 - C. The Native Americans lost one-half of their land in Georgia.
 - D. The Native Americans were allowed to keep their land in Georgia.
-

6. After the Revolutionary War, many Americans wanted to settle in the lands west of the Appalachian Mountains. The mountains were difficult to cross. According to history, what was the solution to help settlers move into Kentucky and other places in the area?

- A. Ships were used to take people to New Orleans and to Kentucky.
 - B. Trains were built to take people to Canada and to Kentucky.
 - C. Trails were built to go through the Appalachian Mountains into Kentucky.
 - D. Canals were built to go around the Appalachian Mountains into Kentucky.
-

7. Your teacher gave your class an assignment where each student had to talk about a famous person in the history of Georgia. Your teacher wants students to help in the grading. Which of the following would be the BEST way to make sure the students were fair in grading?

- A. Students would grade the work but not include their names as the graders.
 - B. Students would grade only their friends' work.
 - C. Students would grade the work and compare their results with the teacher's grade.
 - D. Students would grade only their own work.
-

8. Look at the following information about Georgian products and resources:

- Cotton is grown in all regions of Georgia.
- Most of the peanuts are grown in the southwestern part of Georgia.
- Cattle, hogs, and chickens are raised in all regions of Georgia.
- Most of the kaolin is mined in southern Georgia.

Based on the information provided, which of the following is true?

- A. Kaolin and pecans are only found in northern Georgia.
 - B. Cotton and peanuts are only found in northeastern Georgia.
 - C. Kaolin and cotton are found in southern Georgia.
 - D. Chickens and wheat are found in southeastern Georgia.
-

9. Suppose that you wanted to find out about the climate of another country. Which should you study to learn the MOST about its climate?

- A. the people's laws
 - B. the people's religion
 - C. the people's language
 - D. the people's clothing
-

10. There are often a number of ways to solve a problem. For example, Europeans settling in the "New World" met Native Americans. Both the Europeans and the Native Americans had different ways of living. Which of the following would have been the FAIREST way for these two groups to live in the same region?

- A. The Europeans should live the way the Native Americans do.
- B. Both the Native Americans and the Europeans should leave North and South America.
- C. The Native Americans should live the way the Europeans do.
- D. Both the Native Americans and the Europeans should have areas where each can live.

Answer Key

1. C) The amounts of money spent on streets and the playground are almost the same.
2. C) All of these Native American shelters were made from natural materials.
3. C) There is more rain in Amarillo in January than in New Orleans in October.
4. D) Major League Baseball Attendance Figures 1990-1999
5. B) The Native Americans were forced to move to land in the West.
6. C) Trails were built to go through the Appalachian Mountains into Kentucky.
7. C) Students would grade the work and compare their results with the teacher's grade.
8. C) Kaolin and cotton are found in southern Georgia.
9. D) the people's clothing
10. D) Both the Native Americans and the Europeans should have areas where each can live.