

Name: _____

Date: _____

1. Which resource would you use to find a map of early America?

- A. atlas
- B. globe
- C. glossary
- D. dictionary

2. Sometimes, alternative solutions are presented to solve a problem. For example, there were many debtors in the prisons of Great Britain in the 1700s. The only reason they were in prison was because they could not pay their taxes. Many, including James Oglethorpe thought there was a better way to deal with this problem. What was his solution to the problem?

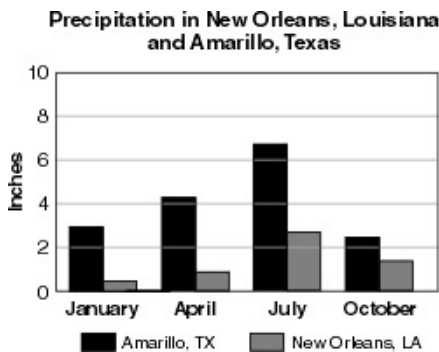
- A. The debts should be paid by the richest landowners in Great Britain.
- B. The prisons were too crowded and should be destroyed.
- C. The debtors could be permitted to go to a colony and start over.
- D. The prisoners should work in the prisons to pay for their debts.

3. Robert needs to know what the word *colony* means. Which part of his textbook is BEST to use to find its meaning?

- A. atlas
- B. index
- C. glossary
- D. table of contents

4.

Use the graph below to answer this question.

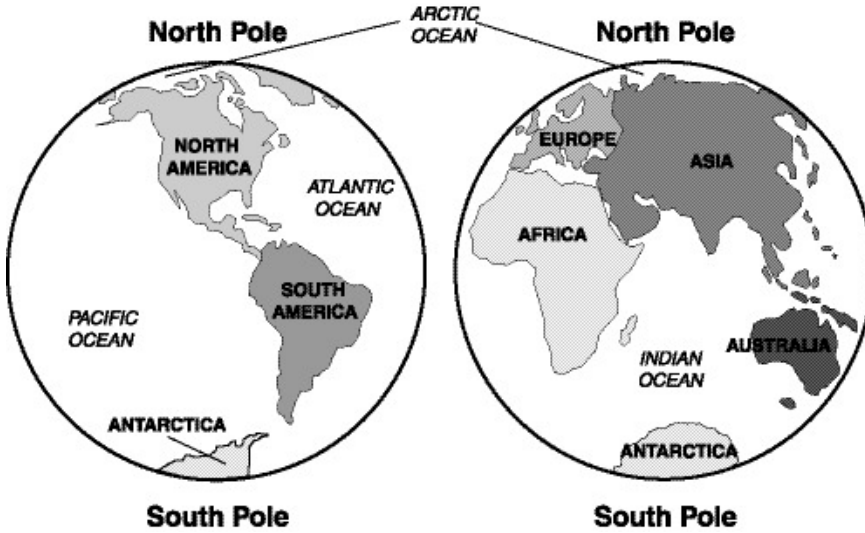


Based on the information in the graph, which of the following is a correct statement?

- A. There is more rain in New Orleans in July than in Amarillo in April.
- B. New Orleans has more rain in April than in July.
- C. There is more rain in Amarillo in January than in New Orleans in October.
- D. Amarillo has more rain in January than in April.

5.

Use the maps below to answer this question.



Based on the information provided on the maps, which statement is correct?

- A. The continents of Europe and Asia are connected to each other.
- B. The prime meridian runs through North and South America.
- C. The Indian Ocean borders North and South America.
- D. The equator runs through Africa and North America.

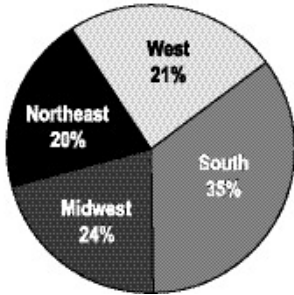
6. By the early 1800s, the Native Americans of Georgia had lost most of their land to white settlers. When the settlers wanted the remaining land, they took the matter to the federal government. What was the federal government's solution to this problem?

- A. The Native Americans had land that had been taken from them returned.
- B. The Native Americans were forced to move to land in the West.
- C. The Native Americans lost one-half of their land in Georgia.
- D. The Native Americans were allowed to keep their land in Georgia.

7.

Use the circle graph below to answer this question.

**Percentage of U.S. Population
by Region – 1990**



Based on the information in the graph, which statement is correct?

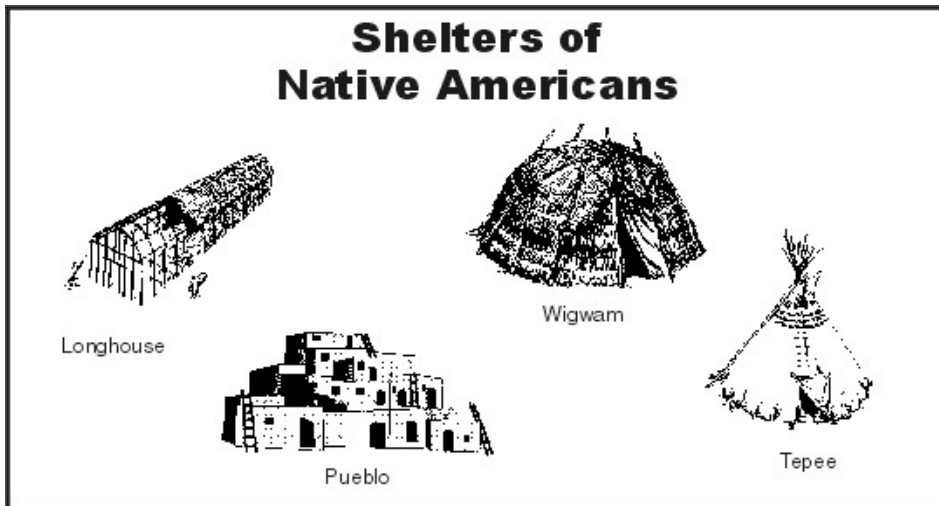
- A. There are more people in the Northeast and the West than in the Midwest and the South.
 - B. There are more people in the South and the Midwest than in the Northeast and the West.
 - C. There are more people in the West and the Midwest than in the South and the Northeast.
 - D. There are more people in the Midwest and the Northeast than in the West and the South.
-

8. Which of the following would be the BEST place to find information on the life of George Washington?

- A. atlas
 - B. almanac
 - C. newspaper
 - D. encyclopedia
-

9.

Use the pictures below to answer this question.



According to the pictures, which of the following is a correct statement?

- A. All of these Native American shelters were made from animal hides.
- B. The longhouse and the wigwam were built in areas with little rain.
- C. All of these Native American shelters were made from natural materials.
- D. The teepee and the pueblo were easy to take down and move.

10. By the early 1800s, the Native Americans of Georgia had lost most of their land to white settlers. When the settlers wanted the remaining land, they took the matter to the national government. What was the national government's solution to this problem?

- A. The Native Americans had land that had been taken from them returned.
- B. The Native Americans were forced to move to land in the West.
- C. The Native Americans lost one-half of their land in Georgia.
- D. The Native Americans were allowed to keep their land in Georgia.

Answer Key

1. A) atlas
2. C) The debtors could be permitted to go to a colony and start over.
3. C) glossary
4. C) There is more rain in Amarillo in January than in New Orleans in October.
5. A) The continents of Europe and Asia are connected to each other.
6. B) The Native Americans were forced to move to land in the West.
7. B) There are more people in the South and the Midwest than in the Northeast and the West.
8. D) encyclopedia
9. C) All of these Native American shelters were made from natural materials.
10. B) The Native Americans were forced to move to land in the West.