

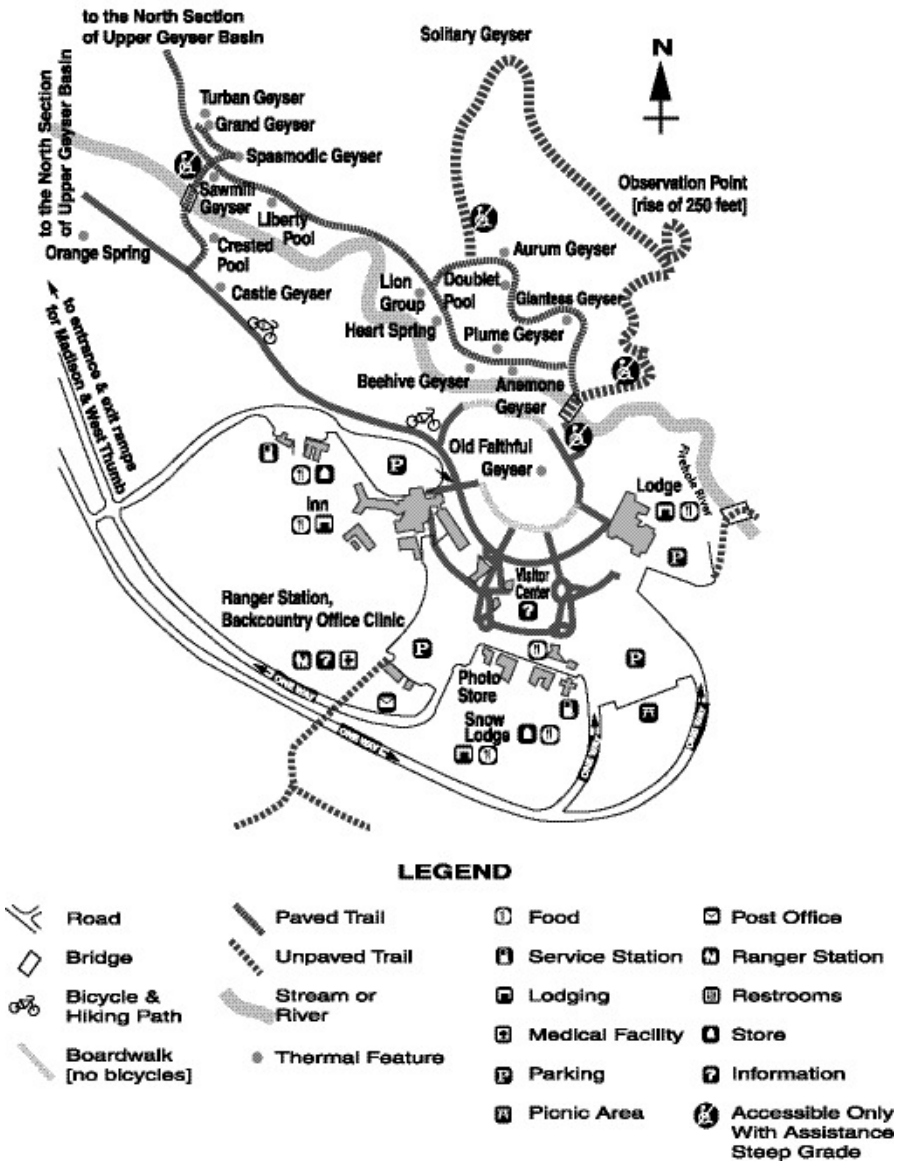
Name: _____

Date: _____

1.

Use the map below to answer this question.

YELLOWSTONE NATIONAL PARK

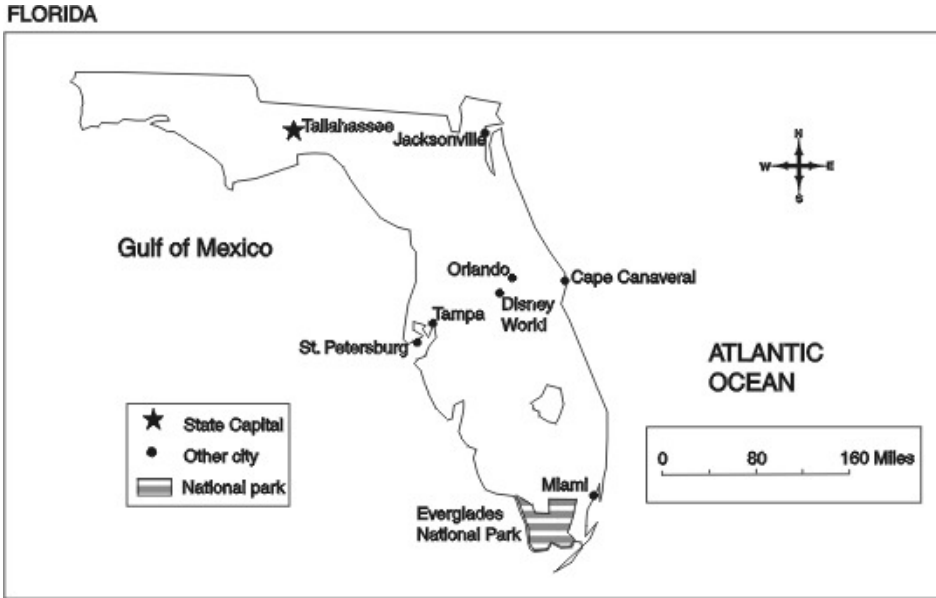


Where would you go in the national park shown above to find a medical facility?

- A. Snow Lodge
- B. Visitor Center
- C. Ranger Station
- D. Observation Point

2.

Use the map below to answer this question.

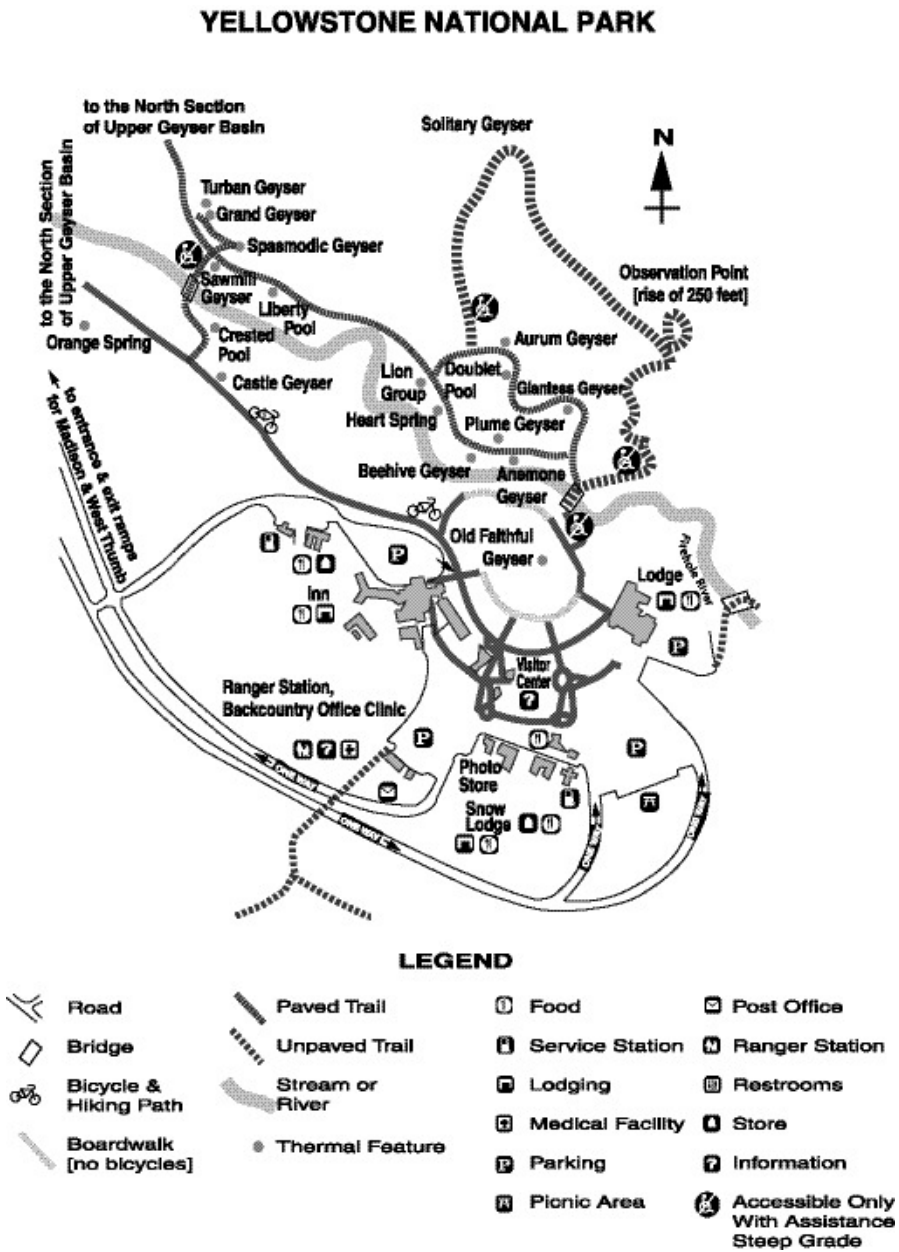


This is a map of Florida. According to the map, what geographical features have made Florida a major vacation spot?

- A. Many of Florida's cities are located in the middle of the state.
- B. The capital city of Tallahassee is in the northern part of the state.
- C. Much of Florida is located on or near bodies of water.
- D. Florida is located in the eastern part of the United States.

3.

Use the map below to answer this question.



Which of the following is found at the Ranger Station?

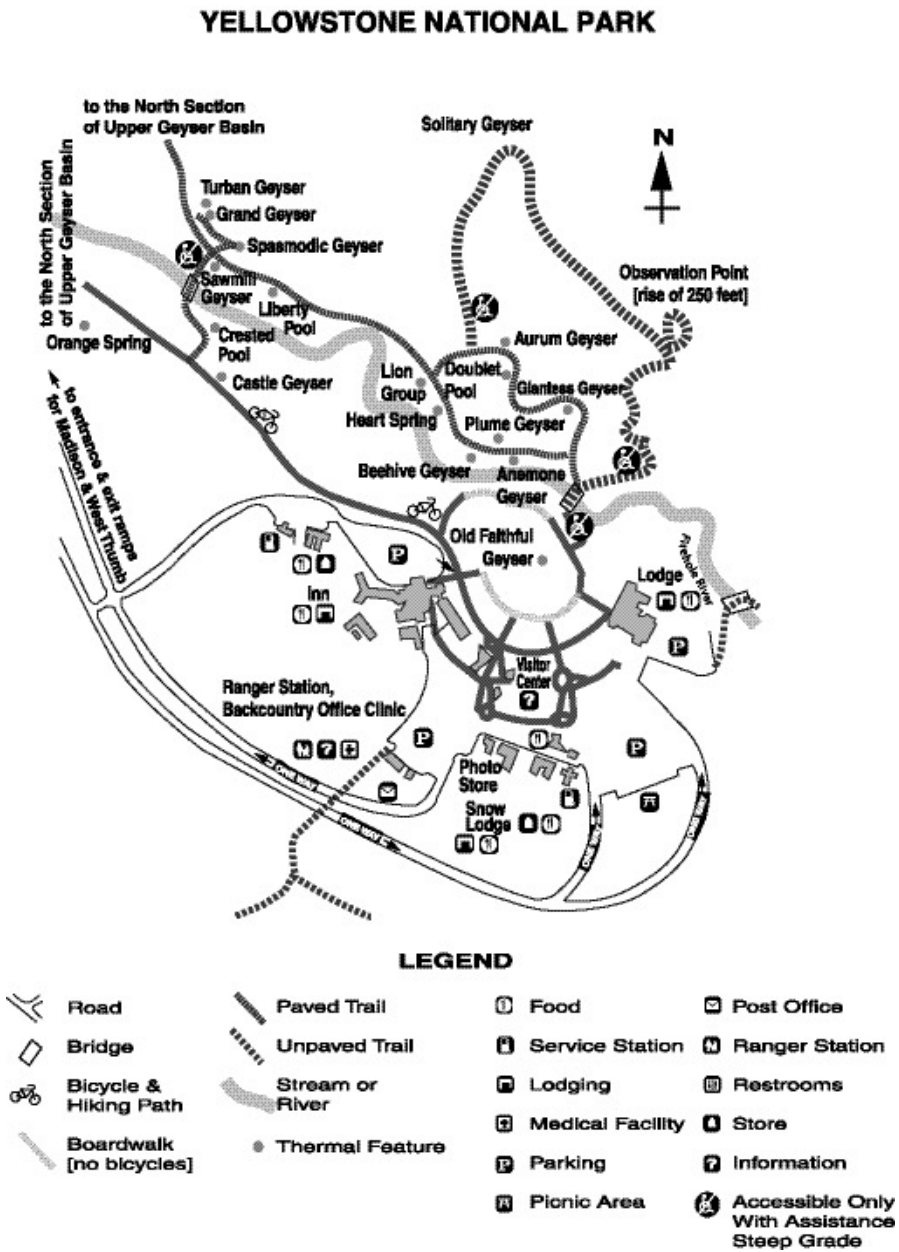
- A. a store
- B. restrooms
- C. a picnic area
- D. a medical facility

4. Many countries are trying to use hydroelectric power and solar energy to make electricity. These are better than using coal, iron, and natural gas because

- A. the power plants are not expensive to build.
 - B. they do not pollute the air.
 - C. the power plants are easy to build.
 - D. they do not cost the customer anything.
-

5.

Use the map below to answer this question.



Look at the map. Which natural feature flows through the Old Faithful area?

- A. Orange Spring
- B. Crested Pool
- C. Firehole River
- D. Beehive Geyser

6. Many of the Native Americans who lived on the Great Plains were nomadic people. Why did they move from place to place?

- A. They were finding new areas to mine.
 - B. They were looking for fertile lands to farm.
 - C. They were trapping fur-bearing animals.
 - D. They were following the buffalo to hunt.
-

7. The use of natural resources affects the environment. Many human activities cause pollution. What is pollution?

- A. an agreement to restrict the number of resources being used
 - B. the shipping of materials from country to country
 - C. the use of renewable resources such as forests and grasslands
 - D. putting impure substances into the land, water, and air
-

8. Which of the following is the BEST example of an ecological problem that has been caused by the growth of factories in the United States?

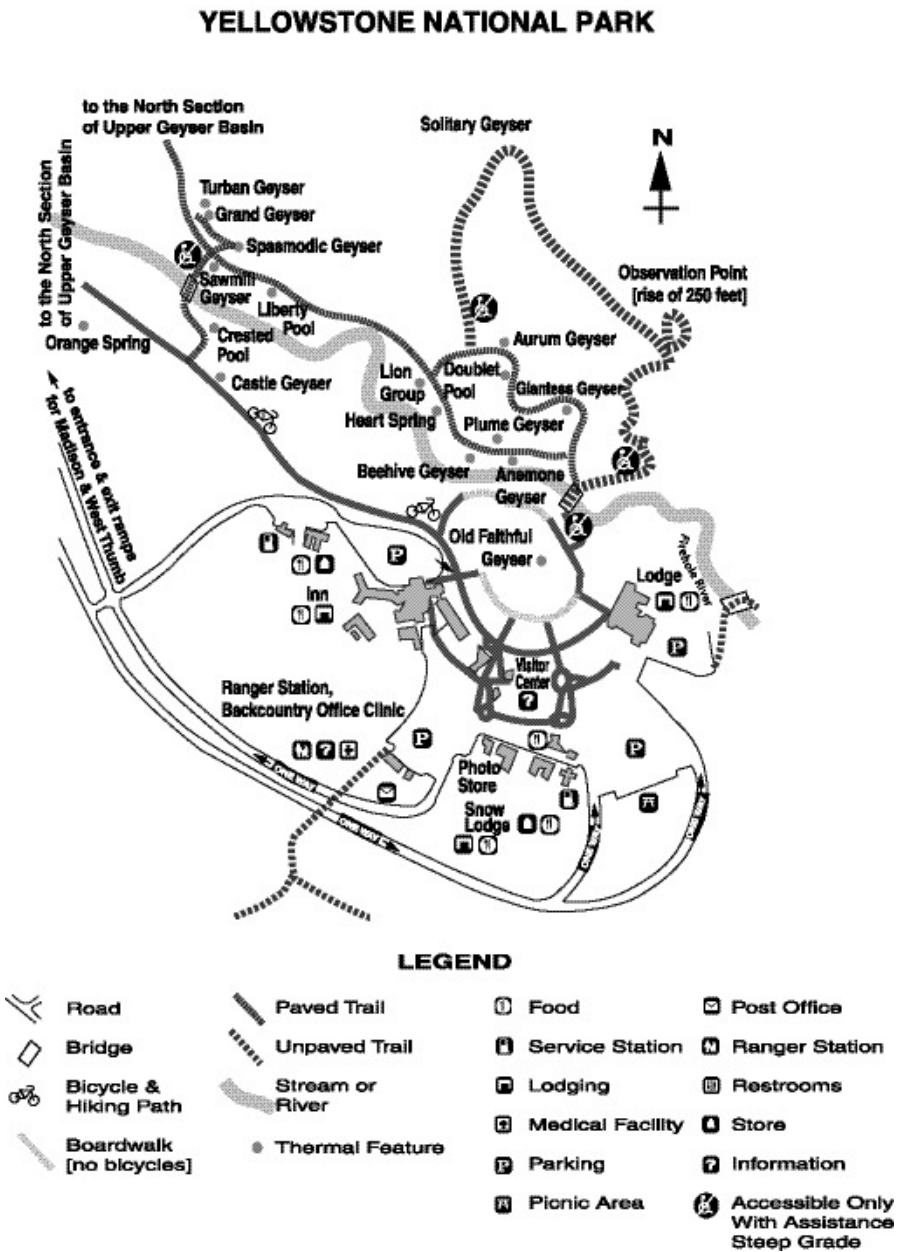
- A. crowded housing
 - B. labor strikes
 - C. water pollution
 - D. rural poverty
-

9. Certain regions of the United States are better suited for certain economic activities. Which BEST explains why the midwestern region of the United States is well suited to farming?

- A. There are many mountains located in this region.
 - B. The region has a dry climate throughout the entire year.
 - C. There are many forested areas in this region.
 - D. The region has good soil and an adequate water supply.
-

10.

Use the map below to answer this question.



Places have both natural features and cultural features. Which of the following is a natural feature?

- A. Photo Store
- B. Snow Lodge
- C. Castle Geyser
- D. Visitor Center

Answer Key

1. C) Ranger Station
2. C) Much of Florida is located on or near bodies of water.
3. D) a medical facility
4. B) they do not pollute the air.
5. C) Firehole River
6. D) They were following the buffalo to hunt.
7. D) putting impure substances into the land, water, and air
8. C) water pollution
9. D) The region has good soil and an adequate water supply.
10. C) Castle Geyser