

Name: _____

Date: _____

1. Certain regions of the United States are better suited for certain economic activities. Which BEST explains why the midwestern region of the United States is well suited to farming?

- A. There are many mountains located in this region.
 - B. The region has a dry climate throughout the entire year.
 - C. There are many forested areas in this region.
 - D. The region has good soil and an adequate water supply.
-

2.

Use the list of physical features below to answer this question.

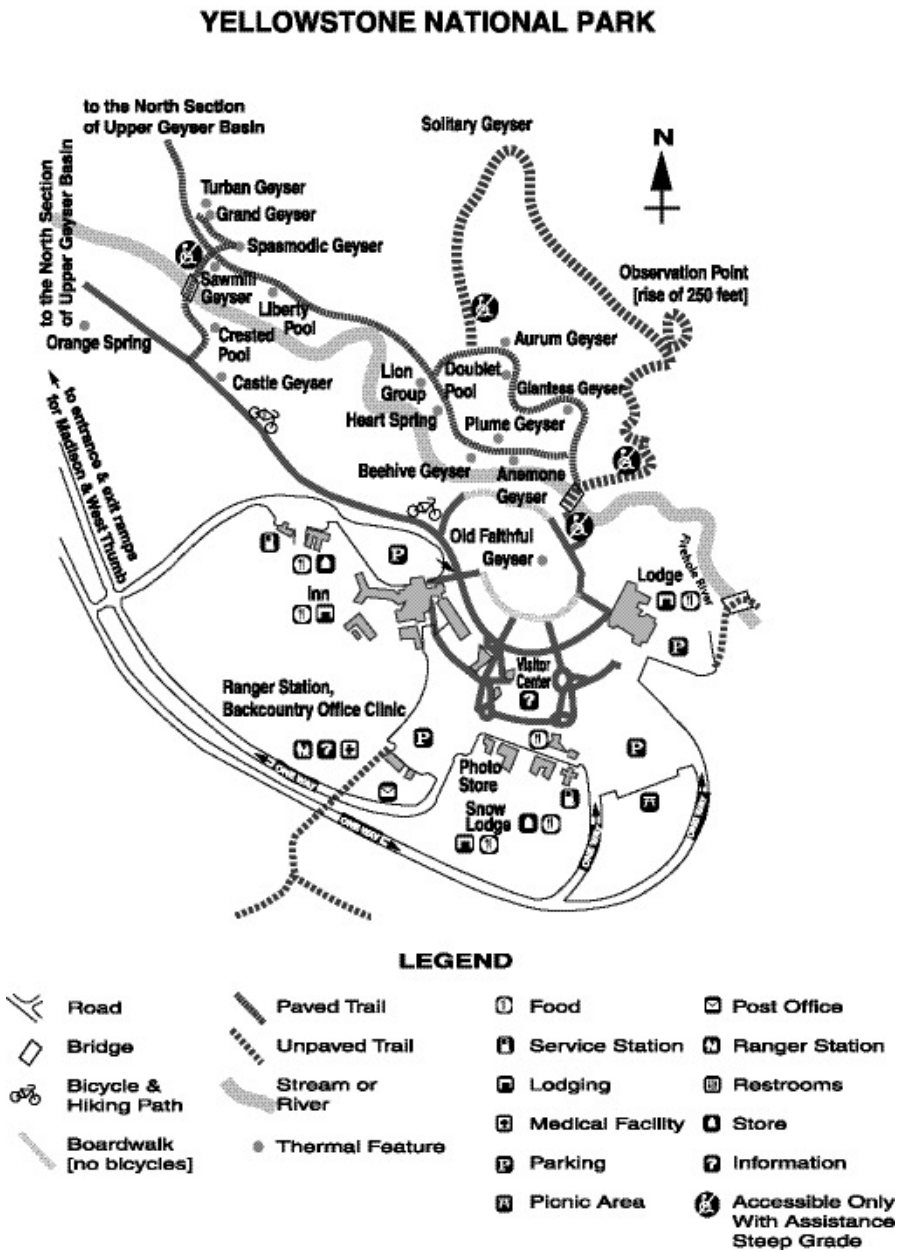
- Pacific Ocean
- Rocky Mountains
- Cascade Mountains
- Columbia River

Which region of the United States would have states that border or include these physical features?

- A. Midwest
 - B. Northeast
 - C. Southeast
 - D. Northwest
-

3.

Use the map below to answer this question.



Which of the following is found at the Ranger Station?

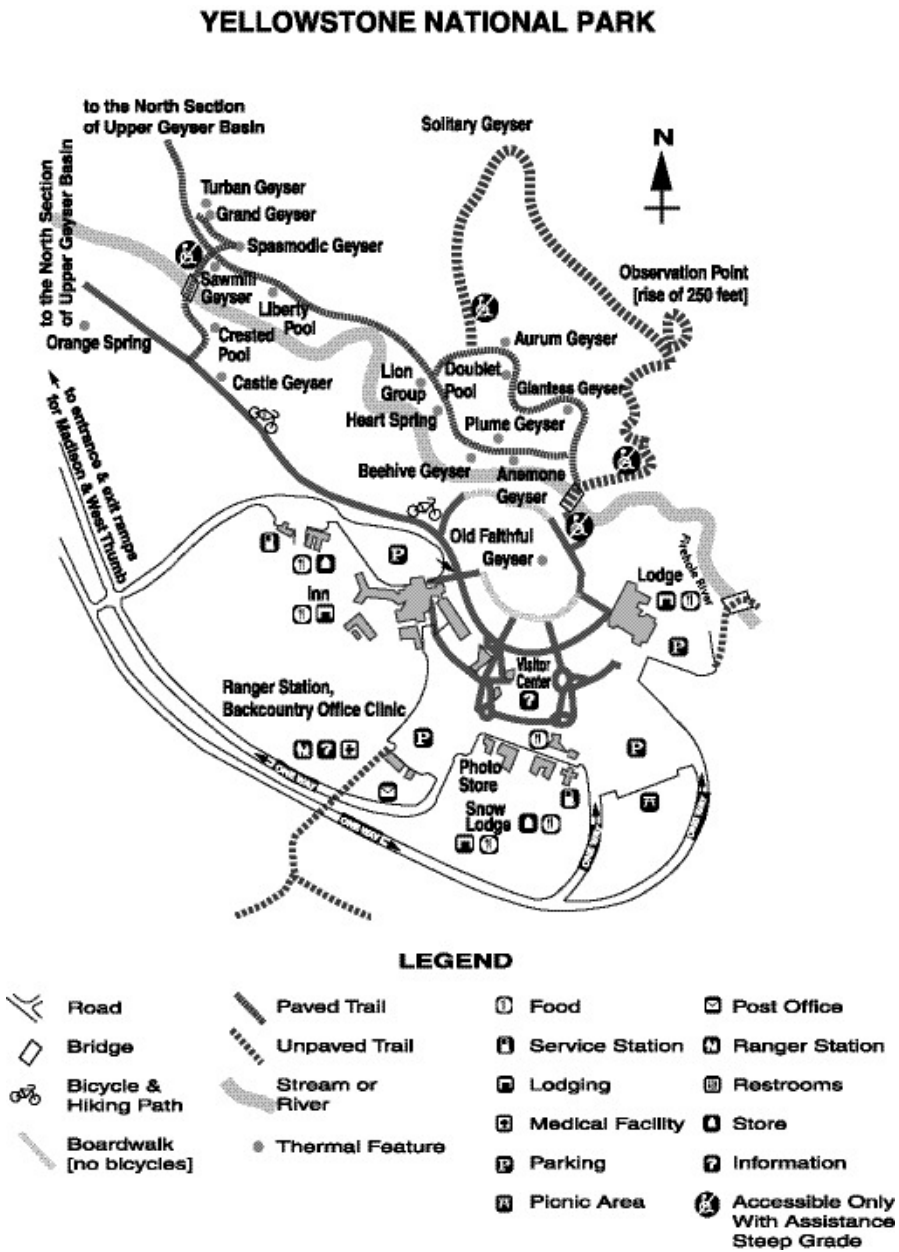
- A. a store
- B. restrooms
- C. a picnic area
- D. a medical facility

4. Many of the Native Americans who lived on the Great Plains were nomadic people. Why did they move from place to place?

- A. They were finding new areas to mine.
 - B. They were looking for fertile lands to farm.
 - C. They were trapping fur-bearing animals.
 - D. They were following the buffalo to hunt.
-

5.

Use the map below to answer this question.

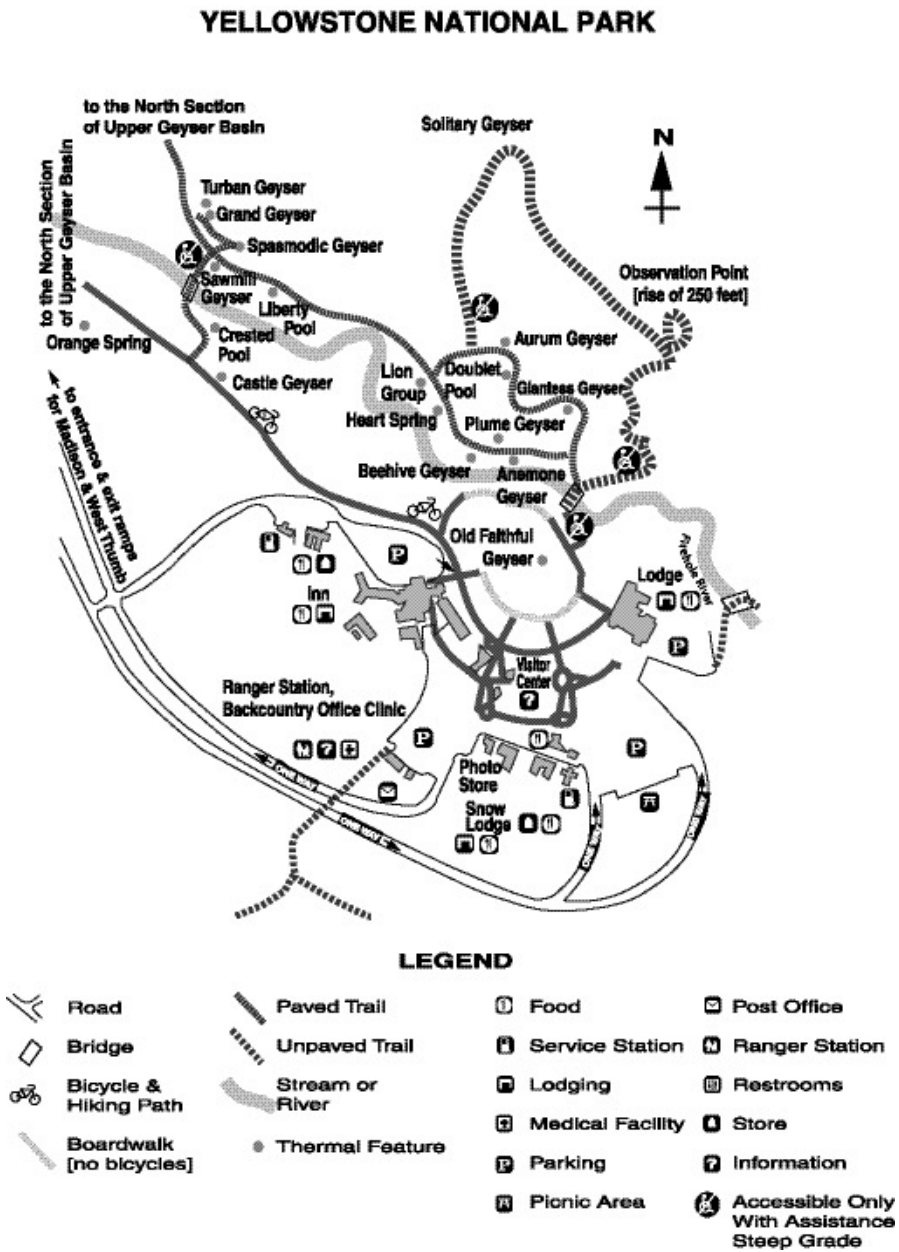


Look at the map. Which natural feature flows through the Old Faithful area?

- A. Orange Spring
- B. Crested Pool
- C. Firehole River
- D. Beehive Geyser

6.

Use the map below to answer this question.

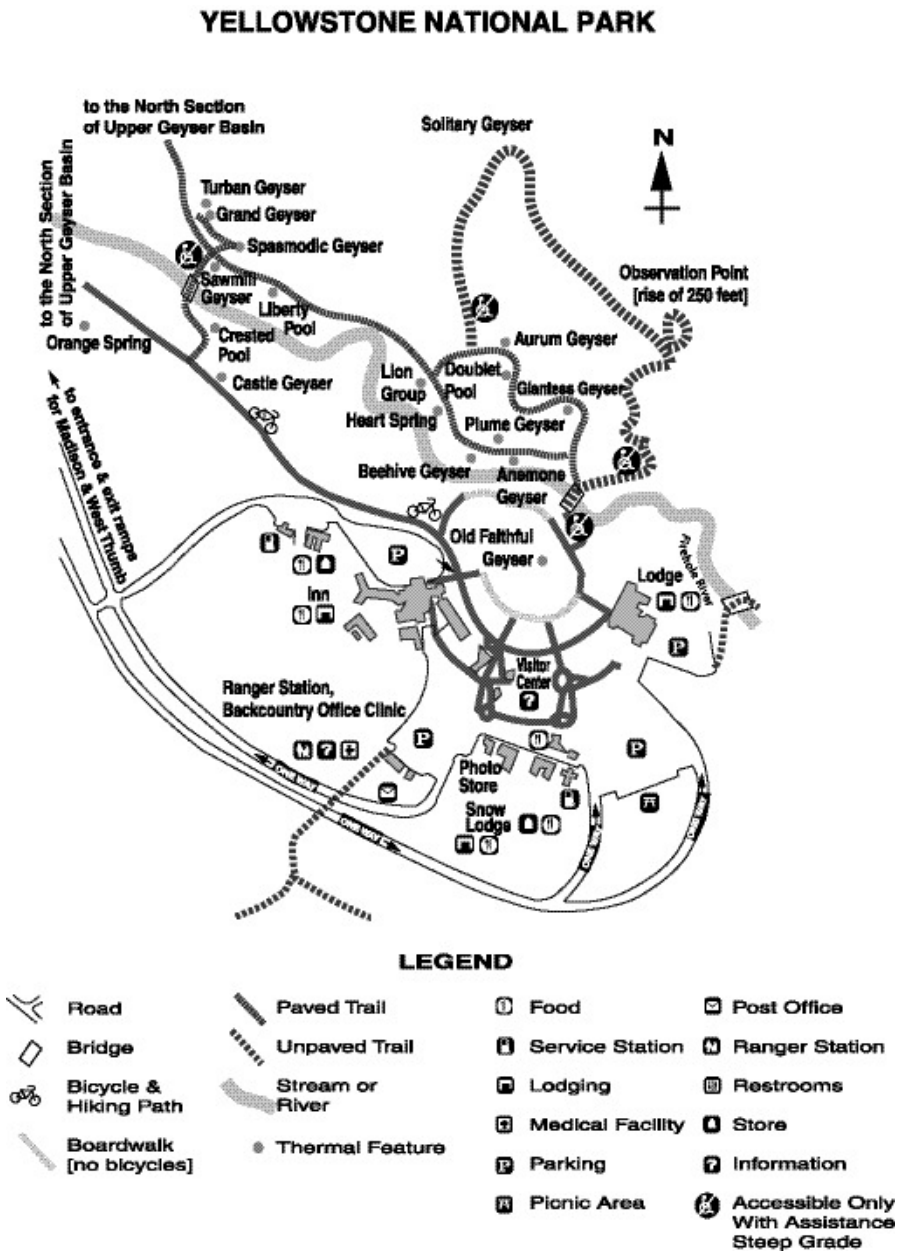


Where would you go in the national park shown above to find a medical facility?

- A. Snow Lodge
- B. Visitor Center
- C. Ranger Station
- D. Observation Point

7.

Use the map below to answer this question.



Places have both natural features and cultural features. Which of the following is a natural feature?

- A. Photo Store
- B. Snow Lodge
- C. Castle Geyser
- D. Visitor Center

8. Gasoline-powered cars add to the pollution of the air in the United States. One alternative to gasoline-powered cars is to develop electric or solar-powered cars. What is one of the main problems with electric and solar-powered cars?


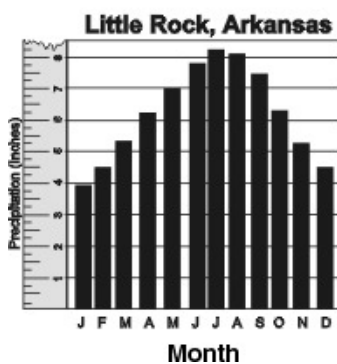

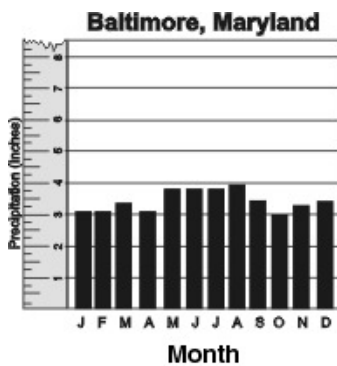
- A. They cause too much damage to the environment.
- B. They only work on sunny days.
- C. They are too expensive for most people to buy.
- D. They need special roads in order to be used.

9. Certain regions of the United States are better suited for certain economic activities. For example, the climate, physical features, and natural resources of the Pacific Northwest are suited for

- A. raising sheep and cattle.
- B. drilling and mining.
- C. growing cotton and soybeans.
- D. commercial fishing.

10.

Use the graphs below to answer this question.



According to the information in the graphs, which of the following is true?

- A. Little Rock, Arkansas has more rain and higher temperatures than Baltimore, Maryland.
- B. Baltimore, Maryland has more rain than Little Rock, Arkansas.
- C. Little Rock, Arkansas has more rain and lower temperatures than Baltimore, Maryland.
- D. Baltimore, Maryland has higher temperatures than Little Rock, Arkansas.

Answer Key

1. D) The region has good soil and an adequate water supply.
2. D) Northwest
3. D) a medical facility
4. D) They were following the buffalo to hunt.
5. C) Firehole River
6. C) Ranger Station
7. C) Castle Geysir
8. C) They are too expensive for most people to buy.
9. D) commercial fishing.
10. A) Little Rock, Arkansas has more rain and higher temperatures than Baltimore, Maryland.